



Adı Soyadı : .....

Numarası : .....

Konu: Zihinden Toplama İşlemi Etkinliği

Aşağıdaki toplama işlemlerini zihinden yapınız.

a)  $10 + 30 = \dots\dots\dots$

b)  $20 + 10 = \dots\dots\dots$

c)  $40 + 40 = \dots\dots\dots$

d)  $50 + 50 = \dots\dots\dots$

e)  $60 + 70 = \dots\dots\dots$

f)  $90 + 60 = \dots\dots\dots$

g)  $100 + 30 = \dots\dots\dots$

h)  $300 + 20 = \dots\dots\dots$

i)  $600 + 40 = \dots\dots\dots$

j)  $800 + 70 = \dots\dots\dots$

k)  $400 + 50 = \dots\dots\dots$

l)  $700 + 80 = \dots\dots\dots$

m)  $120 + 10 = \dots\dots\dots$

n)  $430 + 50 = \dots\dots\dots$

o)  $340 + 20 = \dots\dots\dots$

p)  $610 + 70 = \dots\dots\dots$

q)  $550 + 40 = \dots\dots\dots$

r)  $110 + 80 = \dots\dots\dots$

a)  $280 + 100 = \dots\dots\dots$

b)  $150 + 100 = \dots\dots\dots$

c)  $320 + 200 = \dots\dots\dots$

d)  $480 + 300 = \dots\dots\dots$

e)  $580 + 400 = \dots\dots\dots$

f)  $310 + 300 = \dots\dots\dots$

g)  $240 + 100 = \dots\dots\dots$

h)  $650 + 300 = \dots\dots\dots$

i)  $560 + 200 = \dots\dots\dots$

j)  $250 + 600 = \dots\dots\dots$

k)  $420 + 500 = \dots\dots\dots$

l)  $170 + 400 = \dots\dots\dots$

m)  $270 + 80 = \dots\dots\dots$

n)  $450 + 60 = \dots\dots\dots$

o)  $130 + 90 = \dots\dots\dots$

p)  $630 + 70 = \dots\dots\dots$

q)  $390 + 50 = \dots\dots\dots$

r)  $430 + 70 = \dots\dots\dots$

Aşağıdaki tabloda verilen toplama işlemlerini zihinden yapınız.

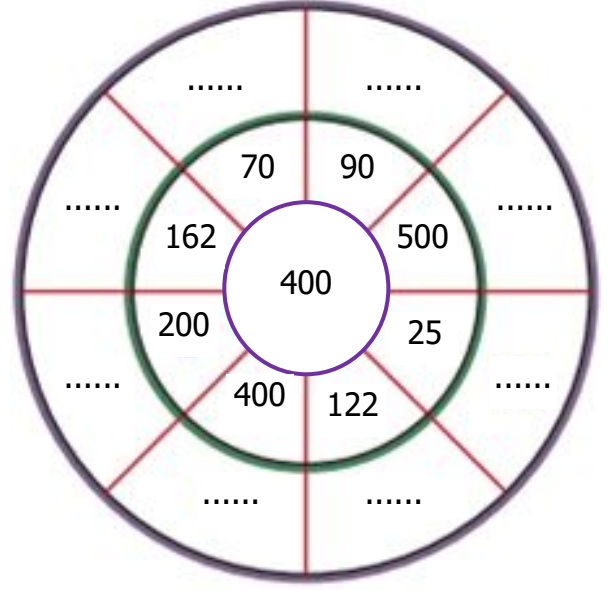
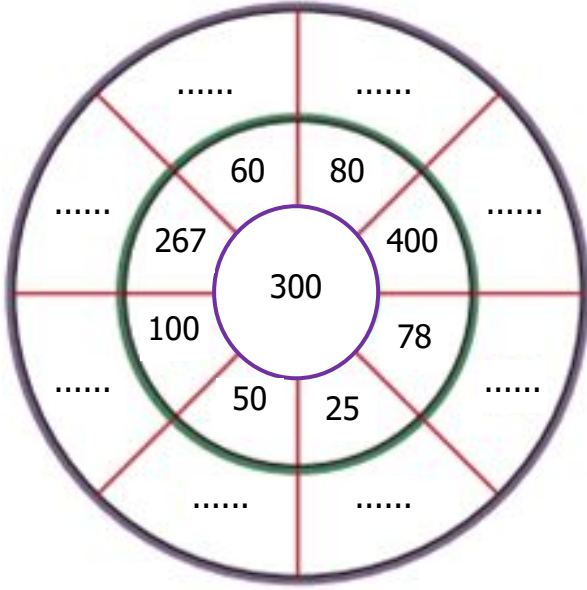
+	15	32	58	72
300				
500				
700				

+	27	46	63	87
200				
400				
800				

+	100	200	300	400
254				
345				
456				

+	300	400	500	600
145				
369				
312				

Aşağıda verilen sayı çarkının ortasındaki sayı ile kenarlarındaki sayıları zihinden toplayıp noktalı yerlere yazınız.



Aşağıdaki toplama işlemlerini zihinden yapalım.

$246 + 200 = \dots\dots\dots$

$234 + 500 = \dots\dots\dots$

$420 + 500 = \dots\dots\dots$

$325 + 600 = \dots\dots\dots$

$190 + 800 = \dots\dots\dots$

$320 + 600 = \dots\dots\dots$

$450 + 100 = \dots\dots\dots$

$595 + 400 = \dots\dots\dots$

$563 + 100 = \dots\dots\dots$

$256 + 300 = \dots\dots\dots$

$178 + 700 = \dots\dots\dots$

$301 + 500 = \dots\dots\dots$

$482 + 500 = \dots\dots\dots$

$324 + 100 = \dots\dots\dots$

$317 + 600 = \dots\dots\dots$

$254 + 700 = \dots\dots\dots$

$730 + 200 = \dots\dots\dots$

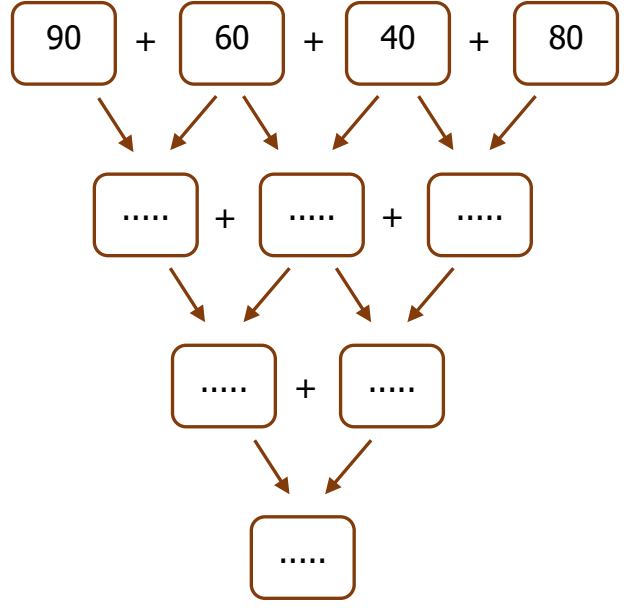
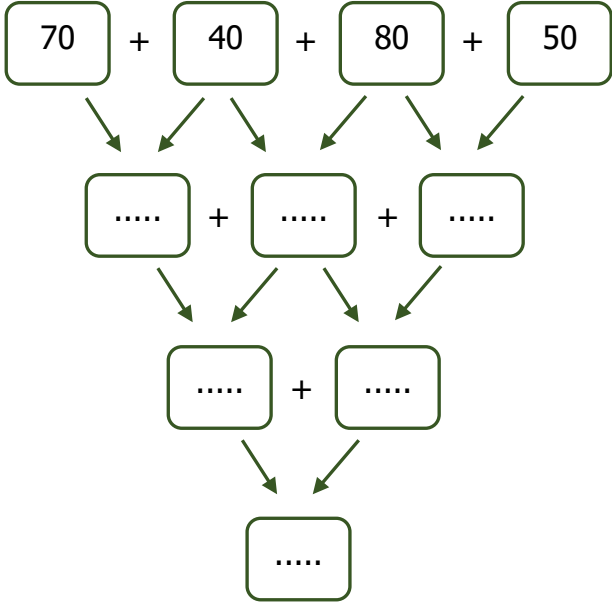
$540 + 300 = \dots\dots\dots$

$125 + 800 = \dots\dots\dots$

$357 + 500 = \dots\dots\dots$

$493 + 200 = \dots\dots\dots$

Aşağıdaki toplama işlemlerini zihinden yapalım.



Aşağıdaki toplama işlemlerini zihinden yaparak tabloyu doldurunuz.

+	→		
↓		45	13
		28	36

+	→		
↓		29	34
		17	23

+	→		
↓		38	22
		41	56

+	→		
↓		26	19
		57	44

+	→		
↓		13	48
		39	55

+	→		
↓		52	37
		44	23

+	→		
↓		30	48
		18	27

+	→		
↓		41	36
		37	28

+	→		
↓		25	32
		44	55