

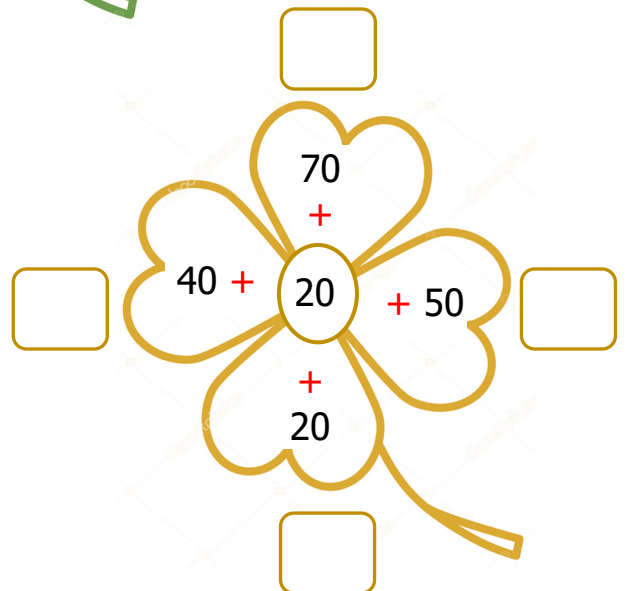
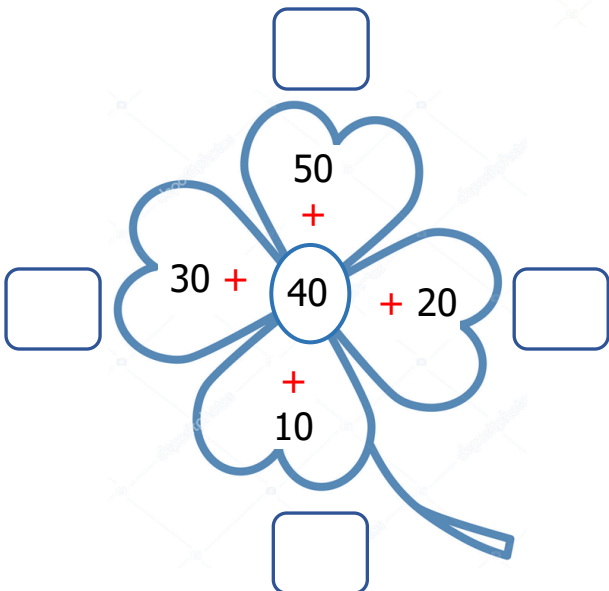
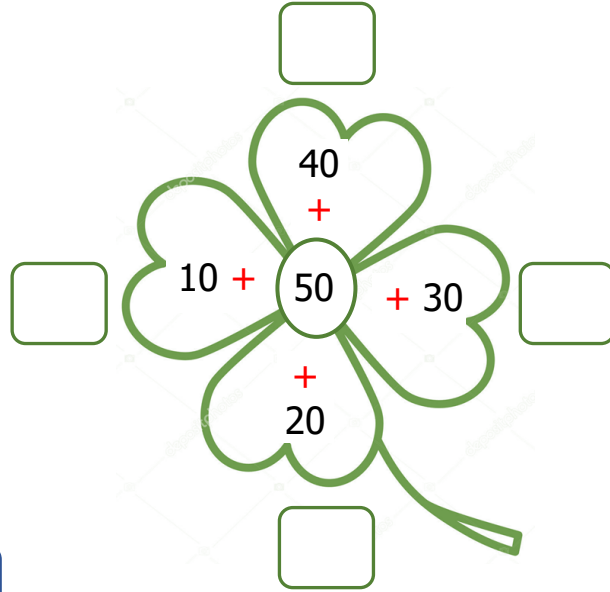
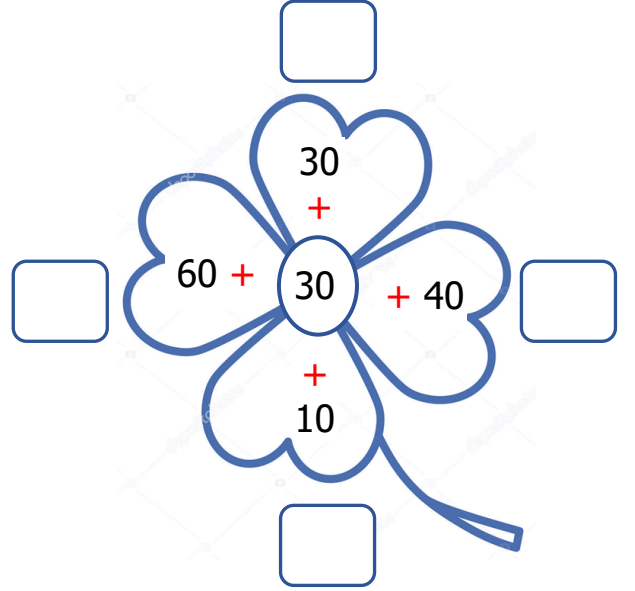
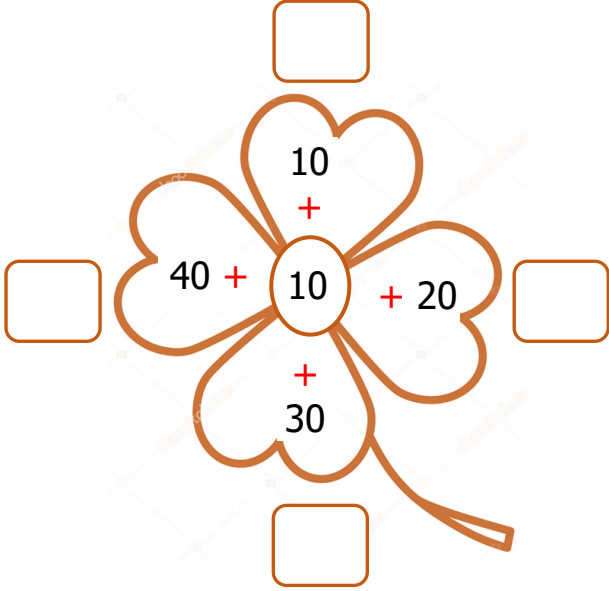


Adı Soyadı :

Numarası :

Konu: Zihinden Toplayalım

Aşağıdaki toplama işlemlerini zihinden yapınız.



Aşağıdaki toplama işlemlerini zihinden yapınız. Sonuçları aynı olan işlemleri eşleştiriniz.

$10 + 20$

$20 + 40$

$30 + 10$

$50 + 20$

$40 + 40$

$60 + 30$

$10 + 10$

$10 + 50$

$40 + 30$

$10 + 10$

$50 + 40$

$20 + 20$

$20 + 10$

$30 + 50$

Aşağıdaki toplama işlemlerini zihinden yapınız.

$23 + 14 = \dots$

$12 + 24 = \dots$

$37 + 10 = \dots$

$11 + 26 = \dots$

$15 + 33 = \dots$

$26 + 22 = \dots$

$40 + 18 = \dots$

$16 + 13 = \dots$

$12 + 35 = \dots$

$44 + 14 = \dots$

$20 + 36 = \dots$

$12 + 25 = \dots$

$$\begin{array}{r} 23 \\ + 18 \\ \hline \dots \end{array}$$

$$\begin{array}{r} 14 \\ + 32 \\ \hline \dots \end{array}$$

$$\begin{array}{r} 38 \\ + 16 \\ \hline \dots \end{array}$$

$$\begin{array}{r} 29 \\ + 17 \\ \hline \dots \end{array}$$

$$\begin{array}{r} 37 \\ + 12 \\ \hline \dots \end{array}$$