



Adı Soyadı :

Numarası :

Konu: Çarpma İşlemi Etkinliği 4

Aşağıdaki çarpma işlemlerini yaparak sonuçlarıyla eşleştiriniz.

1	46
	x 28

	+

2	73
	x 54

	+

	3942
	6392
	1794
	12884

3	39
	x 46

	+

4	68
	x 94

	+

1	34
	x 87

	+

2	75
	x 68

	+

	5874
	2958
	1666
	5100

3	17
	x 98

	+

4	66
	x 89

	+

1	324
	x 36

	+

2	465
	x 84

	+

	42 600
	39 060
	11 664
	18 647

3	643
	x 29

	+

4	568
	x 75

	+

1	756
	x 48

	+

2	408
	x 69

	+

	36 288
	33 212
	16 744
	28 152

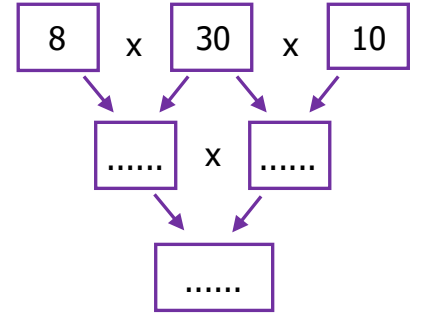
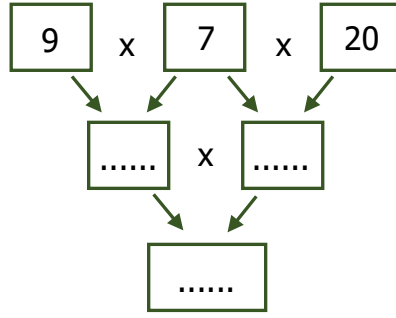
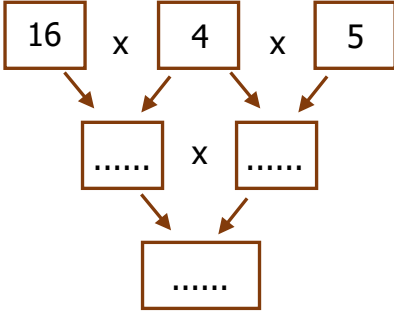
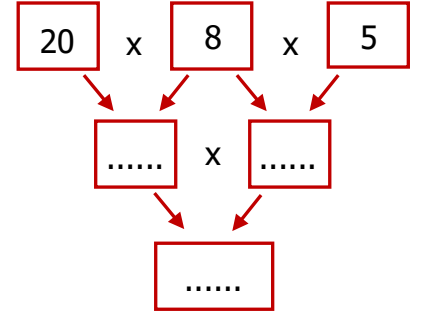
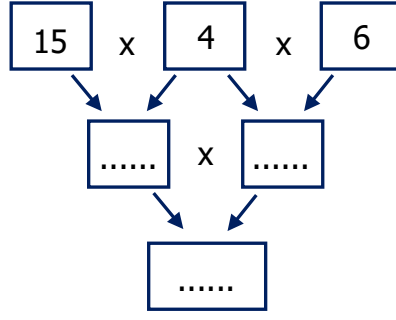
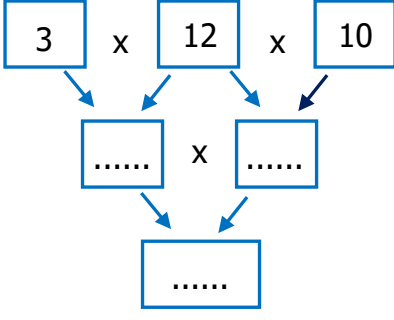
3	364
	x 46

	+

4	437
	x 76

	+

Aşağıdaki çarpma işlemlerini yapalım



Aşağıdaki çarpma işlemlerinde verilmeyen rakamları bulunuz.

$$\begin{array}{r} \text{O}6 \\ \times 37 \\ \hline 182 \\ + 7\text{□} \\ \hline 902 \end{array}$$

O =
□ =

$$\begin{array}{r} \triangle 5 \\ \times 83 \\ \hline 135 \\ + 3\text{□}0 \\ \hline 3735 \end{array}$$

□ =
△ =

$$\begin{array}{r} 5\text{□} \\ \times 49 \\ \hline 504 \\ + 2\triangle 4 \\ \hline 2744 \end{array}$$

□ =
△ =

$$\begin{array}{r} 3\star \\ \times 95 \\ \hline 190 \\ + 3\triangle 2 \\ \hline 3610 \end{array}$$

△ =
★ =

$$\begin{array}{r} \text{□}4 \\ \times 67 \\ \hline 448 \\ + 3\triangle 4 \\ \hline 4288 \end{array}$$

□ =
△ =

$$\begin{array}{r} 3\text{□}6 \\ \times 84 \\ \hline 1264 \\ + 2\text{O}28 \\ \hline 265\triangle 4 \end{array}$$

O =
□ =
△ =

$$\begin{array}{r} 26\text{□} \\ \times 75 \\ \hline 1300 \\ + 182\triangle \\ \hline \star 9500 \end{array}$$

□ =
△ =
★ =

$$\begin{array}{r} \text{□}63 \\ \times 46 \\ \hline 3378 \\ + 2\triangle 52 \\ \hline 2589\star \end{array}$$

□ =
★ =
△ =

$$\begin{array}{r} 38\text{□} \\ \times 36 \\ \hline 2286 \\ + 114\text{O} \\ \hline 13\triangle 16 \end{array}$$

O =
△ =
□ =

$$\begin{array}{r} 63\text{□} \\ \times 64 \\ \hline 2556 \\ + 38\text{O}4 \\ \hline \triangle 0896 \end{array}$$

□ =
O =
△ =