



Adı Soyadı :

Numarası :

Konu: Çarpma İşlemi Etkinliği 6

Aşağıdaki çarpma işlemlerini inceleyiniz. İşlemlerden doğru yapılanlara "D", yanlış yapılanlara "Y" yazınız.

$$\begin{array}{r} 48 \\ \times 6 \\ \hline 288 \end{array}$$

$$\begin{array}{r} 57 \\ \times 7 \\ \hline 389 \end{array}$$

$$\begin{array}{r} 69 \\ \times 4 \\ \hline 276 \end{array}$$

$$\begin{array}{r} 48 \\ \times 9 \\ \hline 432 \end{array}$$

$$\begin{array}{r} 64 \\ \times 8 \\ \hline 502 \end{array}$$

$$\begin{array}{r} 39 \\ \times 23 \\ \hline 117 \\ + 68 \\ \hline 897 \end{array}$$

$$\begin{array}{r} 51 \\ \times 17 \\ \hline 287 \\ + 51 \\ \hline 797 \end{array}$$

$$\begin{array}{r} 24 \\ \times 28 \\ \hline 182 \\ + 48 \\ \hline 662 \end{array}$$

$$\begin{array}{r} 37 \\ \times 26 \\ \hline 222 \\ + 74 \\ \hline 962 \end{array}$$

$$\begin{array}{r} 19 \\ \times 48 \\ \hline 152 \\ + 76 \\ \hline 912 \end{array}$$

$$\begin{array}{r} 63 \\ \times 15 \\ \hline 315 \\ + 63 \\ \hline 945 \end{array}$$

$$\begin{array}{r} 27 \\ \times 23 \\ \hline 81 \\ + 44 \\ \hline 521 \end{array}$$

$$\begin{array}{r} 46 \\ \times 19 \\ \hline 414 \\ + 46 \\ \hline 874 \end{array}$$

$$\begin{array}{r} 35 \\ \times 28 \\ \hline 280 \\ + 70 \\ \hline 980 \end{array}$$

$$\begin{array}{r} 24 \\ \times 38 \\ \hline 192 \\ + 72 \\ \hline 902 \end{array}$$

$$\begin{array}{r} 248 \\ \times 4 \\ \hline 992 \end{array}$$

$$\begin{array}{r} 328 \\ \times 3 \\ \hline 974 \end{array}$$

$$\begin{array}{r} 107 \\ \times 8 \\ \hline 856 \end{array}$$

$$\begin{array}{r} 455 \\ \times 2 \\ \hline 810 \end{array}$$

$$\begin{array}{r} 176 \\ \times 5 \\ \hline 880 \end{array}$$

$$\begin{array}{r} 317 \\ \times 3 \\ \hline 941 \end{array}$$

$$\begin{array}{r} 142 \\ \times 6 \\ \hline 852 \end{array}$$

$$\begin{array}{r} 180 \\ \times 4 \\ \hline 720 \end{array}$$

$$\begin{array}{r} 126 \\ \times 7 \\ \hline 782 \end{array}$$

$$\begin{array}{r} 109 \\ \times 9 \\ \hline 981 \end{array}$$

Aşağıdaki çarpma işlemlerini yapınız. Çarpımlara göre şifrelenmiş atasözünü bulunuz.

$$\begin{array}{r} 30 \\ \times 24 \\ \hline \dots\dots \\ + \dots\dots \\ \hline \dots\dots \end{array}$$

K

$$\begin{array}{r} 16 \\ \times 49 \\ \hline \dots\dots \\ + \dots\dots \\ \hline \dots\dots \end{array}$$

A

$$\begin{array}{r} 21 \\ \times 38 \\ \hline \dots\dots \\ + \dots\dots \\ \hline \dots\dots \end{array}$$

Ü

$$\begin{array}{r} 44 \\ \times 17 \\ \hline \dots\dots \\ + \dots\dots \\ \hline \dots\dots \end{array}$$

Ç

$$\begin{array}{r} 35 \\ \times 19 \\ \hline \dots\dots \\ + \dots\dots \\ \hline \dots\dots \end{array}$$

R

$$\begin{array}{r} 25 \\ \times 18 \\ \hline \dots\dots \\ + \dots\dots \\ \hline \dots\dots \end{array}$$

O

$$\begin{array}{r} 32 \\ \times 31 \\ \hline \dots\dots \\ + \dots\dots \\ \hline \dots\dots \end{array}$$

Ü

$$\begin{array}{r} 62 \\ \times 15 \\ \hline \dots\dots \\ + \dots\dots \\ \hline \dots\dots \end{array}$$

D

$$\begin{array}{r} 40 \\ \times 23 \\ \hline \dots\dots \\ + \dots\dots \\ \hline \dots\dots \end{array}$$

K

$$\begin{array}{r} 36 \\ \times 27 \\ \hline \dots\dots \\ + \dots\dots \\ \hline \dots\dots \end{array}$$

A

$$\begin{array}{r} 23 \\ \times 39 \\ \hline \dots\dots \\ + \dots\dots \\ \hline \dots\dots \end{array}$$

K

$$\begin{array}{r} 52 \\ \times 16 \\ \hline \dots\dots \\ + \dots\dots \\ \hline \dots\dots \end{array}$$

E

$$\begin{array}{r} 34 \\ \times 25 \\ \hline \dots\dots \\ + \dots\dots \\ \hline \dots\dots \end{array}$$

C

$$\begin{array}{r} 26 \\ \times 28 \\ \hline \dots\dots \\ + \dots\dots \\ \hline \dots\dots \end{array}$$

Y

$$\begin{array}{r} 24 \\ \times 29 \\ \hline \dots\dots \\ + \dots\dots \\ \hline \dots\dots \end{array}$$

Ü

$$\begin{array}{r} 30 \\ \times 17 \\ \hline \dots\dots \\ + \dots\dots \\ \hline \dots\dots \end{array}$$

B

$$\begin{array}{r} 27 \\ \times 29 \\ \hline \dots\dots \\ + \dots\dots \\ \hline \dots\dots \end{array}$$

Ş

748 450 850 672 720

--	--	--	--	--

$$\begin{array}{r} 16 \\ \times 37 \\ \hline \dots\dots \\ + \dots\dots \\ \hline \dots\dots \end{array}$$

L

$$\begin{array}{r} 48 \\ \times 14 \\ \hline \dots\dots \\ + \dots\dots \\ \hline \dots\dots \end{array}$$

U

930 696 783 832

--	--	--	--

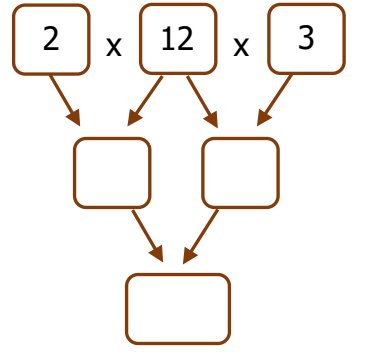
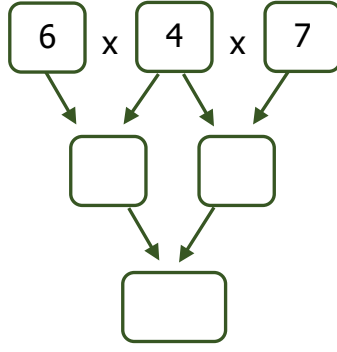
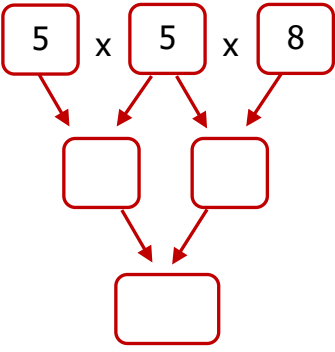
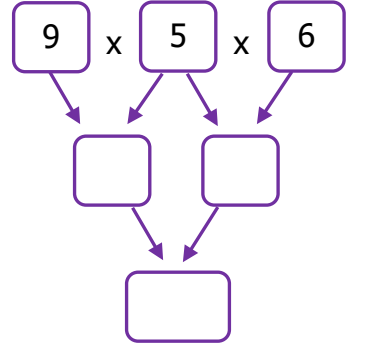
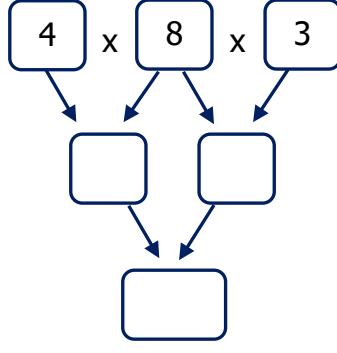
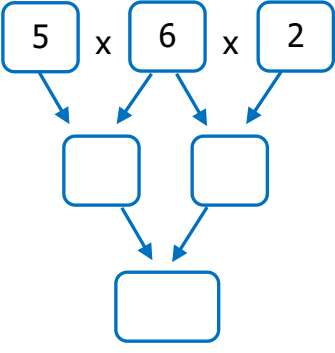
920 784 592 897 972

--	--	--	--	--

510 798 728 992 665

--	--	--	--	--

Okları takip ederek aşağıdaki çarpma işlemlerini yapınız.



Aşağıdaki çarpma işlemlerini sonuçlarıyla eşleştiriniz.

4 x 32	•	•	150	•	24 x 3	•	•	108
6 x 25	•	•	196	•	49 x 6	•	•	312
8 x 17	•	•	296	•	80 x 7	•	•	414
7 x 28	•	•	128	•	39 x 8	•	•	72
9 x 28	•	•	240	•	46 x 9	•	•	310
5 x 48	•	•	252	•	62 x 5	•	•	294
8 x 37	•	•	136	•	27 x 4	•	•	560

