

Adı Soyadı :

Numarası :

Konu: Bölme İşleminde Bölüneni ve Böleni Bulma Etkinliği

Aşağıdaki bölme işlemlerinde verilmeyen bölünenleri örnekteki gibi bulunuz.

$$\begin{array}{r} \dots \quad | \quad 7 \\ - \quad \quad | \quad 13 \\ \hline 4 \end{array}$$

$$\begin{array}{r} 13 \\ \times 7 \\ \hline 91 \end{array} \quad \begin{array}{r} 91 \\ + 4 \\ \hline 95 \end{array}$$

$$\begin{array}{r} \dots \quad | \quad 9 \\ - \quad \quad | \quad 23 \\ \hline 6 \end{array}$$

$$\begin{array}{r} \dots \quad | \quad 13 \\ - \quad \quad | \quad 8 \\ \hline 7 \end{array}$$

$$\begin{array}{r} \dots \quad | \quad 19 \\ - \quad \quad | \quad 15 \\ \hline 16 \end{array}$$

$$\begin{array}{r} \dots \quad | \quad 25 \\ - \quad \quad | \quad 17 \\ \hline 23 \end{array}$$

$$\begin{array}{r} \dots \quad | \quad 43 \\ - \quad \quad | \quad 8 \\ \hline 5 \end{array}$$

$$\begin{array}{r} \dots \quad | \quad 14 \\ - \quad \quad | \quad 27 \\ \hline 12 \end{array}$$

$$\begin{array}{r} \dots \quad | \quad 32 \\ - \quad \quad | \quad 24 \\ \hline 28 \end{array}$$

Aşağıdaki bölme işlemlerinde verilmeyen bölenleri örnekteki gibi bulunuz.

$$\begin{array}{r} 281 \overline{) 13} \\ - \underline{\quad} \\ 8 \end{array}$$
$$\begin{array}{r} 281 \\ - \underline{8} \\ 273 \end{array}$$
$$\begin{array}{r} 273 \overline{) 13} \\ - \underline{26} \\ 013 \\ - \underline{13} \\ 00 \end{array}$$

$$\begin{array}{r} 529 \overline{) \dots} \\ - \underline{\quad} \\ 4 \end{array}$$

$$\begin{array}{r} 185 \overline{) \dots} \\ - \underline{\quad} \\ 3 \end{array}$$

$$\begin{array}{r} 608 \overline{) \dots} \\ - \underline{\quad} \\ 14 \end{array}$$

$$\begin{array}{r} 673 \overline{) \dots} \\ - \underline{\quad} \\ 1 \end{array}$$

$$\begin{array}{r} 273 \overline{) \dots} \\ - \underline{\quad} \\ 9 \end{array}$$

$$\begin{array}{r} 718 \overline{) \dots} \\ - \underline{\quad} \\ 5 \end{array}$$

$$\begin{array}{r} 675 \overline{) \dots} \\ - \underline{\quad} \\ 15 \end{array}$$

$$\begin{array}{r} 304 \overline{) \dots} \\ - \underline{\quad} \\ 10 \end{array}$$

$$\begin{array}{r} 497 \overline{) \dots} \\ - \underline{\quad} \\ 5 \end{array}$$

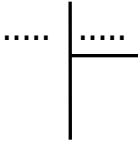
Aşağıdaki bölme işlemlerinde verilmeyen terimleri bulunuz.

Bölünen = 179

Bölen =

Bölüm = 8

Kalan = 3

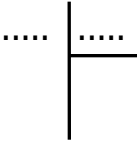


Bölünen =

Bölen = 9

Bölüm = 37

Kalan = 3

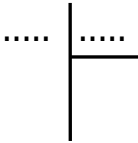


Bölünen = 578

Bölen =

Bölüm = 12

Kalan = 2

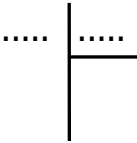


Bölünen = 328

Bölen = 13

Bölüm =

Kalan = 3

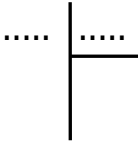


Bölünen = 632

Bölen = 12

Bölüm =

Kalan = 8




Bölünen =

Bölen = 36

Bölüm = 24

Kalan = 22

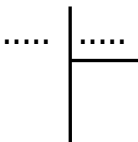


Bölünen = 916

Bölen =

Bölüm = 20

Kalan = 16

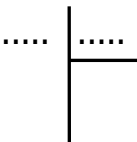


Bölünen =

Bölen = 14

Bölüm = 25

Kalan = 9

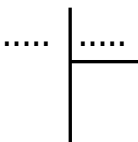


Bölünen = 532

Bölen =

Bölüm = 9

Kalan = 1



Bölünen =

Bölen = 18

Bölüm = 14

Kalan = 7

