





Adı Soyadı : .....


Numarası : .....

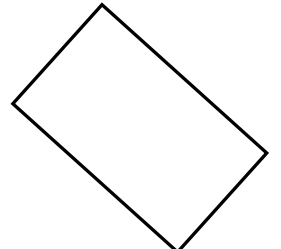
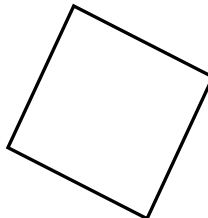

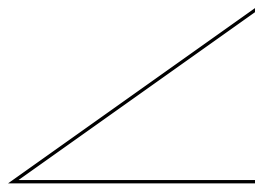
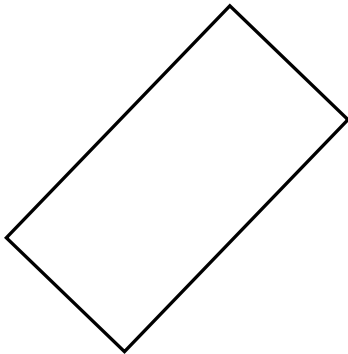
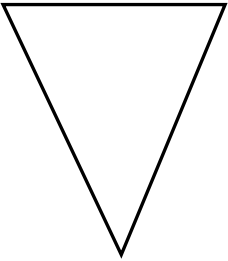
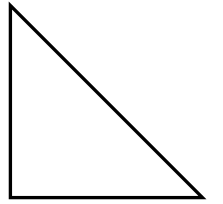
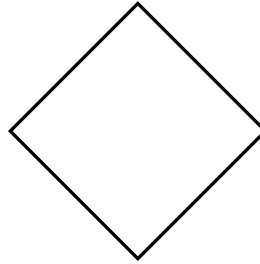


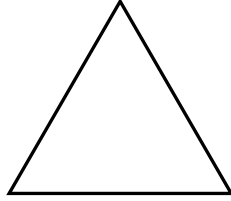

Konu: Geometrik Şekilleri Sınıflandırılım 3

Aşağıdaki geometrik şekilleri belirtilen özelliklerine göre boyayınız.


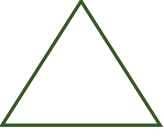



 Dört kenarı ve dört köşesi olan şekilleri maviye boyayınız.

 Üç kenarı ve üç köşesi olan şekilleri kırmızıya boyayınız.


 Kenarı ve köşesi olmayan şekilleri yeşile boyayınız.



Aşağıdaki geometrik şekillerin tabloda belirtilen özelliklerini yazınız.

| Geometrik Şekil                                                                     | Adı | Kenar Sayısı | Köşe Sayısı |
|-------------------------------------------------------------------------------------|-----|--------------|-------------|
|    |     |              |             |
|    |     |              |             |
|    |     |              |             |
|   |     |              |             |
|  |     |              |             |

Kareli kağıttaki noktaları ok yönünde birleştirerek geometrik şekiller oluşturalım.



Aşağıdaki görselde geometrik şekillerin kaçar tane olduklarını yazınız. Görseldeki şekilleri istenilen renklere boyayınız.

Kareleri: kahverengiye

Dikdörtgenleri: yeşile

Çemberleri: kırmızıya


Üçgenleri: maviye

Kare: ..... tane

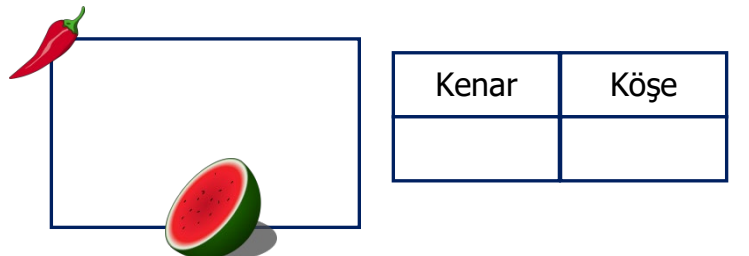
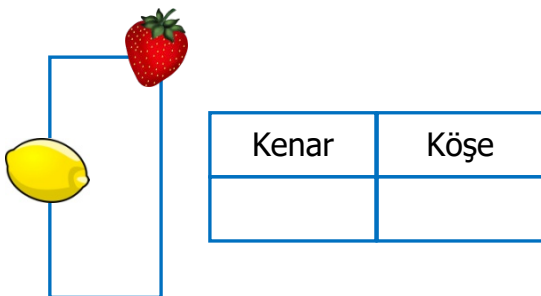
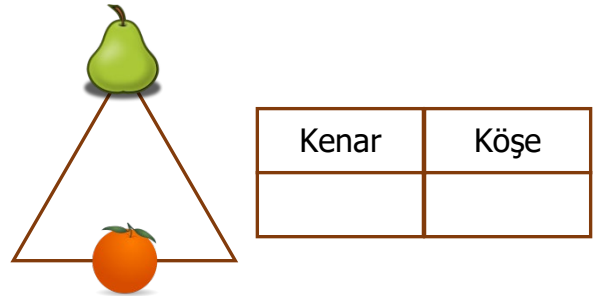
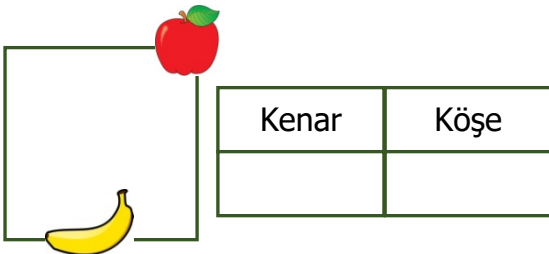
Dikdörtgen: .....tane

Üçgen: ..... tane

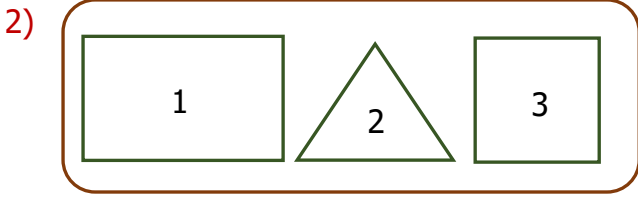

Daire: ..... tane



Aşağıda verilen geometrik şekillerin kenarlarında ve köşelerinde hangi nesnelerin bulunduğunu tablolara yazınız.



1) Hangi geometrik şeklin kenar ve köşesi yoktur?



Yukarıdaki geometrik şekillerden kenar ve köşe sayılarına göre hangi ikisi benzerdir?

A) 1 - 2 B) 2 - 3 C) 1 - 3

3) Yandaki çilek, geometrik şeklin neresindedir?



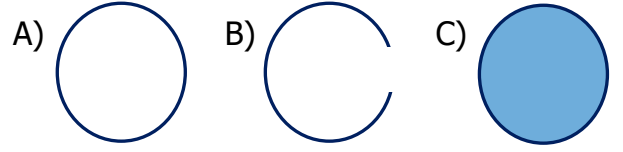
A) Kenarında B) Köşesinde  
C) Yüzünde

4) 4 kenarım, 4 köşem var. Karşılıklı kenarlarım birbirine eşittir.

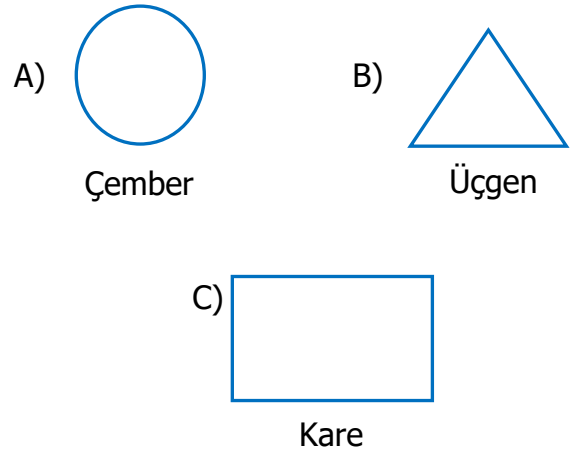
Yukarıda hangi geometrik şeklin özellikleri verilmiştir?




5) Aşağıdaki şekillerden hangisi çemberdir?



6) Aşağıdakilerden hangisi yanlış adlandırılmıştır?



7) Aşağıdaki geometrik şekillerden hangisinin köşe sayısı en azdır?



8) Kenarım ve köşem yoktur.  
Ama içim doludur.

Yukarıda hangi geometrik şeklin özelliği verilmiştir?

A) Çember B) Kare C) Daire