

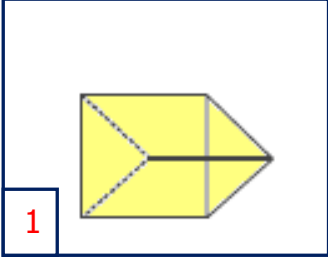


Adı Soyadı : .....

Numarası : .....

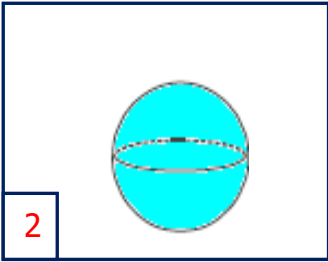

### Konu: Geometrik Cisimleri Tanıyalım Etkinliği 3

Aşağıda verilen geometrik cisimleri, isimleri ve benzedikleri nesnelere numara vererek eşleştiriniz.



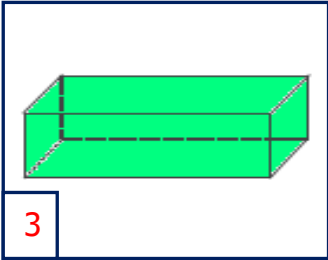
Dikdörtgen  
Prizma

...



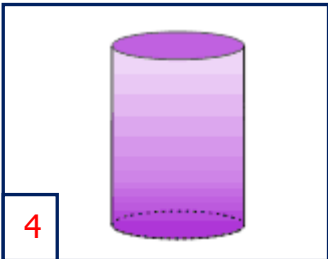

Kare Prizma

...



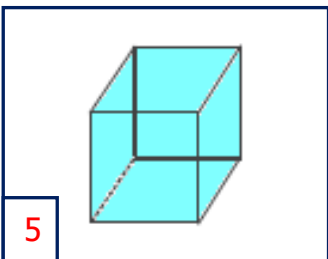
Küp

...



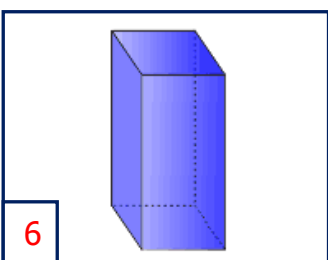
Üçgen Prizma

...



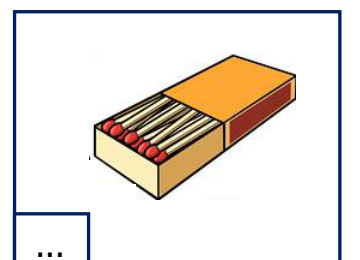
Silindir




...



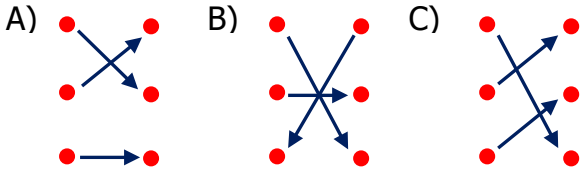
Küre

...

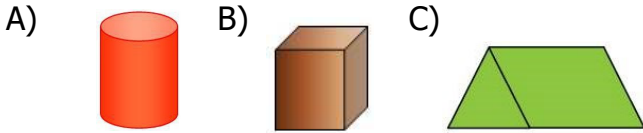


- 1)   
- • Küp
- • Üçgen Prizma
- • Silindir

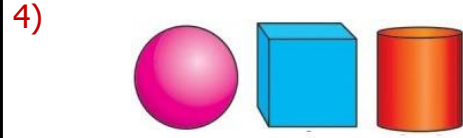
Yukarıdaki eşleştirmelerden hangi şekil ortaya çıkar?



2) Aşağıdaki geometrik cisimlerden hangisinin köşesi yoktur?



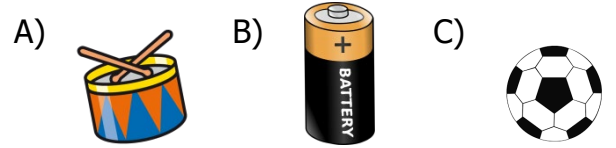
3) Aşağıdakilerden hangisi dikdörtgen prizmasına örnektir?




Hangi geometrik cismin görseli yukarıda yoktur?

- A) Silindir  
B) Küp  
C) Küre

5) Aşağıdakilerden hangisi küreye örnektir?



6) Yandaki nesne hangi geometrik cisme benzemektedir?



- A) Kare Prizma  
B) Küp  
C) Dikdörtgen Prizma

7) Aşağıdakilerden hangisi küp değildir?

