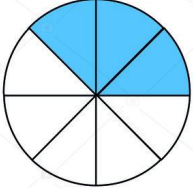


Adı Soyadı :

Numarası :

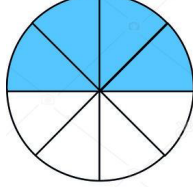
Konu: Basit Kesirler

Aşağıdaki kesirlerin boyalı kısmını ifade eden kesirleri yazalım



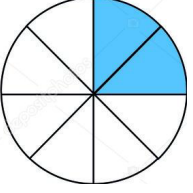
....

....



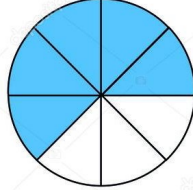
....

....



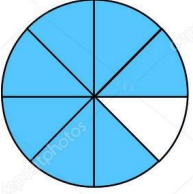
....

....



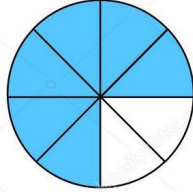
....

....



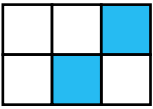
....

....



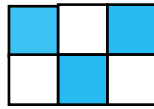
....

....



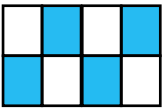
....

....



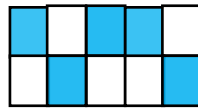
....

....



....


....



....


....

Aşağıdaki şekli belirtilen kadarını boyayınız.
Okunuşunu örnekteki gibi yazınız




$$\frac{2}{8} \rightarrow$$

Sekizde iki
İki bölü sekiz




$$\frac{4}{11} \rightarrow$$

.....
.....



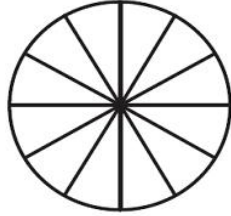
$$\frac{3}{9} \rightarrow$$

.....
.....



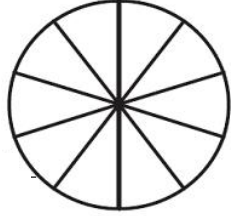
$$\frac{5}{7} \rightarrow$$

.....
.....



$$\frac{8}{12} \rightarrow$$

.....
.....



$$\frac{8}{10} \rightarrow$$

.....
.....

Aşağıdaki kesirlerden basit kesir olanları işaretleyiniz

$\frac{12}{10}$	$\frac{7}{8}$	$\frac{6}{9}$	$\frac{5}{2}$	$\frac{3}{1}$	$\frac{4}{8}$	$\frac{4}{3}$	$\frac{10}{5}$	$\frac{3}{5}$	$\frac{4}{20}$
<input type="checkbox"/>	<input type="checkbox"/>	<input type="checkbox"/>	<input type="checkbox"/>	<input type="checkbox"/>	<input type="checkbox"/>	<input type="checkbox"/>	<input type="checkbox"/>	<input type="checkbox"/>	<input type="checkbox"/>

Aşağıdaki noktalı yerlere uygun sayılar yazarak basit kesirler oluşturunuz.

$\frac{4}{\dots}$	$\frac{\dots}{12}$	$\frac{\dots}{15}$	$\frac{21}{\dots}$	$\frac{\dots}{20}$	$\frac{12}{\dots}$	$\frac{\dots}{2}$	$\frac{9}{\dots}$	$\frac{\dots}{18}$	$\frac{8}{\dots}$
-------------------	--------------------	--------------------	--------------------	--------------------	--------------------	-------------------	-------------------	--------------------	-------------------

Aşağıda verilen kesir modellerini kesir sayısı olarak ifade ederek sayı doğrusunda gösteriniz

