

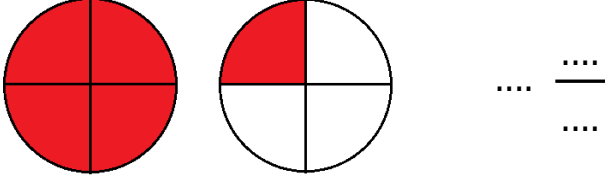


Adı Soyadı :

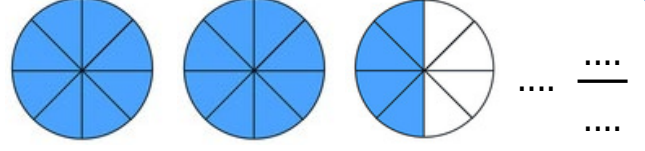
Numarası :

Konu: Tam Sayılı Kesirler Etkinliği

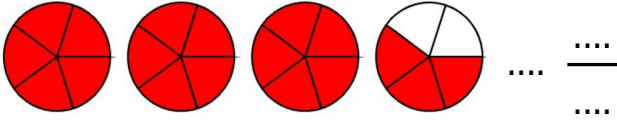
Aşağıdaki şekillerin boyalı kısımlarını tam sayılı kesir olarak yazınız.



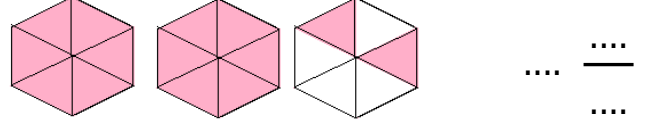
Okunuşu:



Okunuşu:



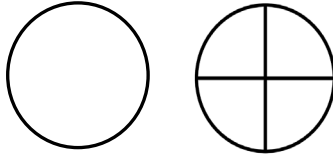
Okunuşu:



Okunuşu:


Aşağıdaki kesir ifadelerine göre şekilleri boyayınız.

$$1 \frac{2}{4}$$



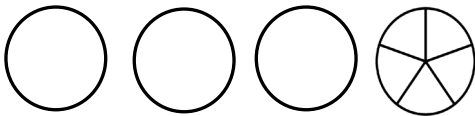
Okunuşu:

$$2 \frac{3}{8}$$




Okunuşu:

$$3 \frac{3}{5}$$



Okunuşu:

$$2 \frac{5}{6}$$



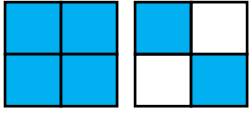
Okunuşu:

Aşağıdaki şekillerin boyalı kısmını ifade eden kesirleri yazınız. Sayı doğrusunda gösteriniz.

Kesir Modeli

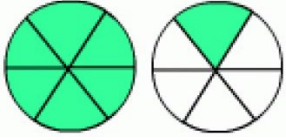
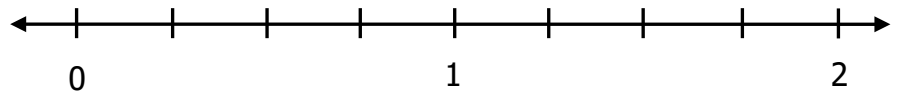
Kesir Sayısı

Sayı Doğrusu



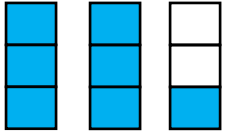
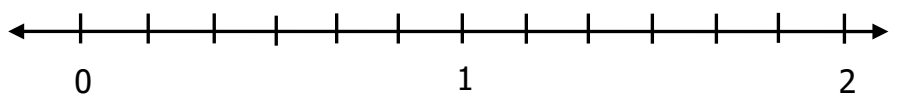
....

....



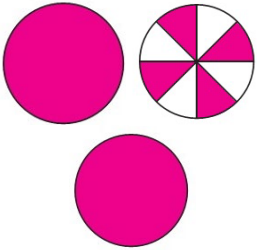
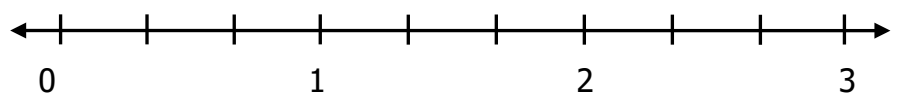
....

....



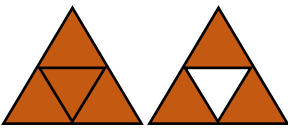
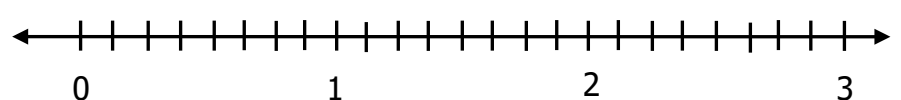
....

....



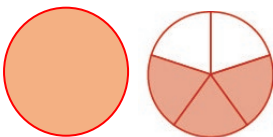
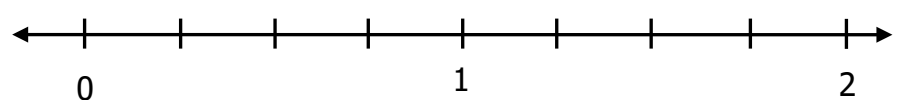
....

....



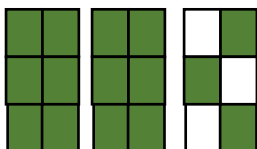
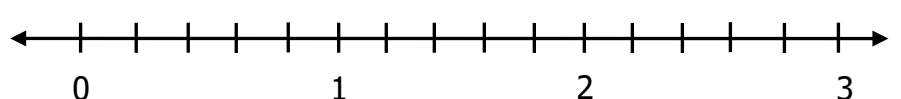
....

....



....

....



....

....

