

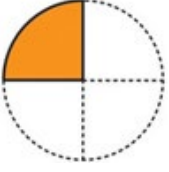


Adı Soyadı :

Numarası :

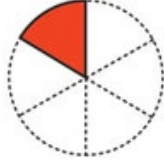
Konu: Birim Kesirleri Karşılaştırma ve Sıralama Etkinliği

Aşağıdaki şekillerin boyalı kısımlarını ifade eden kesirlerin arasına "<, >" sembollerinden uygun olanı yazınız.



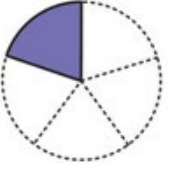
....

....



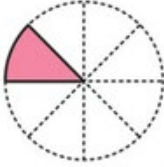
....

....



....

....



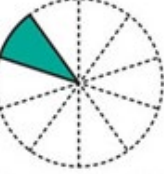
....

....



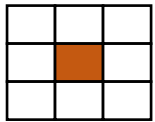
....

....



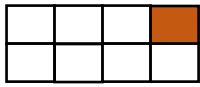
....

....




....

....



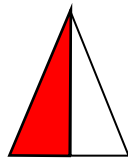
....

....



....

....



....

....

Aşağıdaki birim kesirleri karşılaştırınız. Noktalı yerlere "<, >" sembollerinden uygun olanı yazınız.

$$\text{🌸} \frac{1}{8} \dots \frac{1}{5}$$

$$\text{🌸} \frac{1}{3} \dots \frac{1}{5}$$

$$\text{🌸} \frac{1}{10} \dots \frac{1}{15}$$

$$\text{🌸} \frac{1}{4} \dots \frac{1}{3}$$

$$\text{🌸} \frac{1}{25} \dots \frac{1}{10}$$

$$\text{🌸} \frac{1}{6} \dots \frac{1}{9}$$

$$\text{🌸} \frac{1}{7} \dots \frac{1}{9}$$

$$\text{🌸} \frac{1}{5} \dots \frac{1}{2}$$

$$\text{🌸} \frac{1}{12} \dots \frac{1}{21}$$

$$\text{🌸} \frac{1}{9} \dots \frac{1}{8}$$

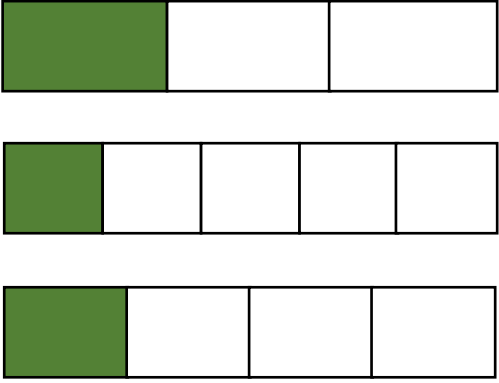
$$\text{🌸} \frac{1}{30} \dots \frac{1}{35}$$

$$\text{🌸} \frac{1}{50} \dots \frac{1}{20}$$

$$\text{🌸} \frac{1}{13} \dots \frac{1}{12}$$

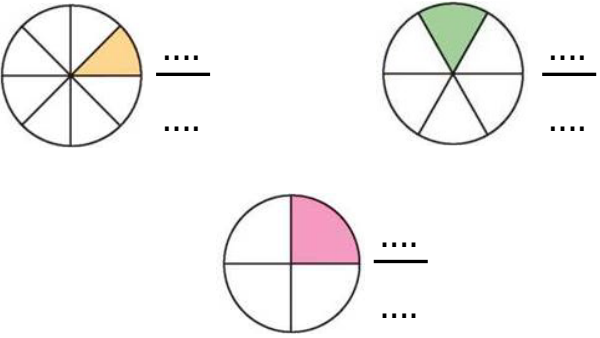
$$\text{🌸} \frac{1}{60} \dots \frac{1}{50}$$

Aşağıdaki şekillerin boyalı kısımlarını kesir olarak yazınız. Büyükten küçüğe doğru sıralayınız.



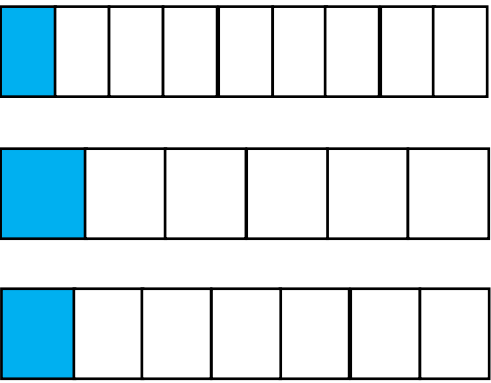
 $\frac{\dots}{\dots}$ $\frac{\dots}{\dots}$ $\frac{\dots}{\dots}$

 $\frac{\dots}{\dots}$ $\frac{\dots}{\dots}$ $\frac{\dots}{\dots}$



 $\frac{\dots}{\dots}$ $\frac{\dots}{\dots}$ $\frac{\dots}{\dots}$


 $\frac{\dots}{\dots}$ $\frac{\dots}{\dots}$ $\frac{\dots}{\dots}$




 $\frac{\dots}{\dots}$ $\frac{\dots}{\dots}$ $\frac{\dots}{\dots}$


 $\frac{\dots}{\dots}$ $\frac{\dots}{\dots}$ $\frac{\dots}{\dots}$


Aşağıdaki kesirleri sembol kullanarak büyükten küçüğe doğru sıralayınız.


 $\frac{1}{7}$, $\frac{1}{4}$, $\frac{1}{5}$ → $\frac{\dots}{\dots}$ $\frac{\dots}{\dots}$ $\frac{\dots}{\dots}$

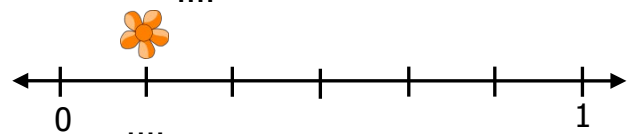
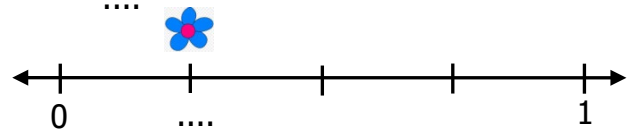
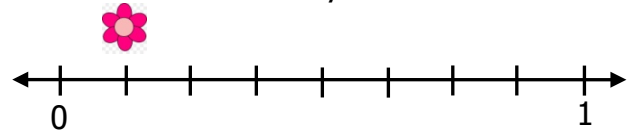

 $\frac{1}{10}$, $\frac{1}{15}$, $\frac{1}{9}$ → $\frac{\dots}{\dots}$ $\frac{\dots}{\dots}$ $\frac{\dots}{\dots}$

Aşağıdaki kesirleri sembol kullanarak küçükten büyüğe doğru sıralayınız.


 $\frac{1}{8}$, $\frac{1}{12}$, $\frac{1}{10}$ → $\frac{\dots}{\dots}$ $\frac{\dots}{\dots}$ $\frac{\dots}{\dots}$


 $\frac{1}{25}$, $\frac{1}{15}$, $\frac{1}{20}$ → $\frac{\dots}{\dots}$ $\frac{\dots}{\dots}$ $\frac{\dots}{\dots}$

Aşağıdaki sayı doğrusunda verilen çiçeklere ait birim kesirleri yazarak büyükten küçüğe doğru sıralayınız.



$\frac{\dots}{\dots}$ $\frac{\dots}{\dots}$ $\frac{\dots}{\dots}$

 $\frac{\dots}{\dots}$ $\frac{\dots}{\dots}$ $\frac{\dots}{\dots}$