

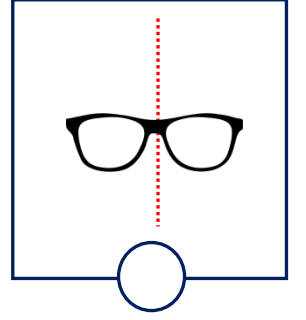
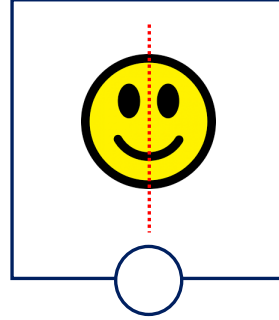
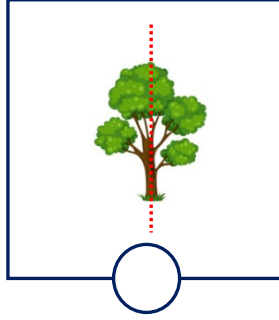
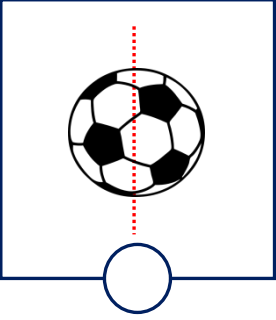
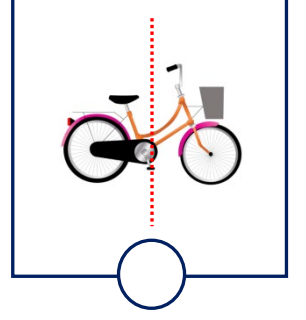
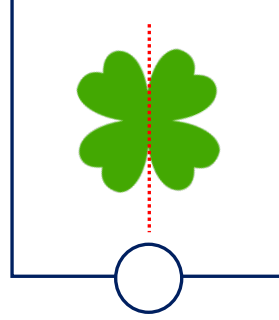
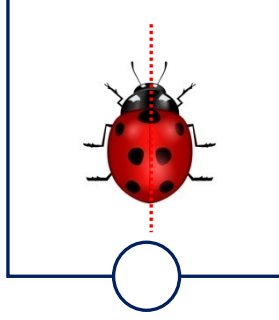
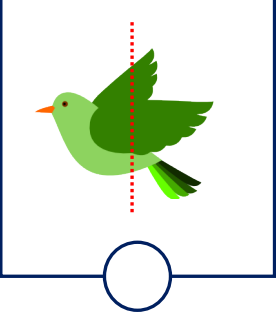


Adı Soyadı :





Numarası :

Konu: Simetrik Şekiller (Simetri) Etkinliği 3

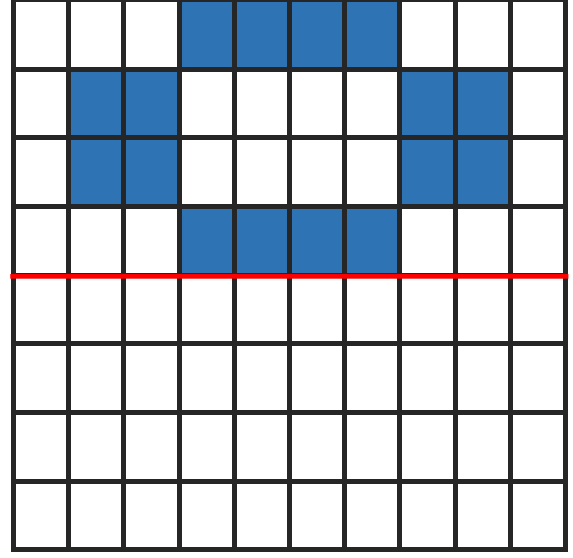
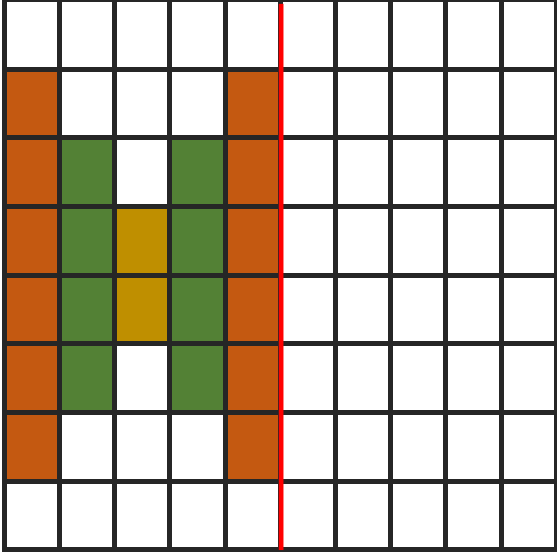
Verilen çizgilere göre simetrik olan nesnelere işaretleyelim.



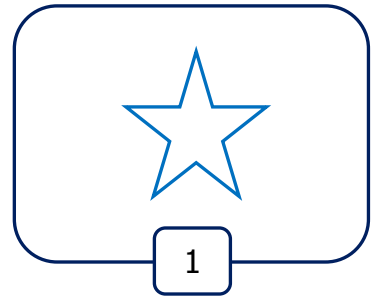
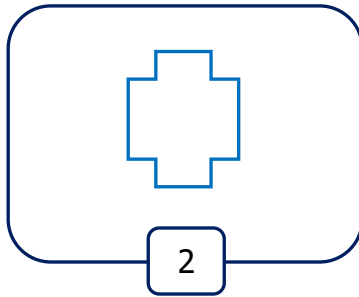
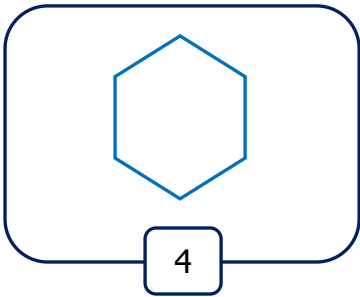
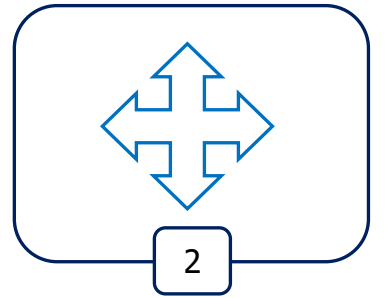
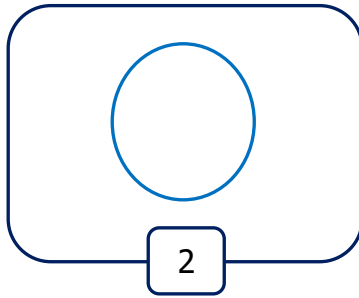
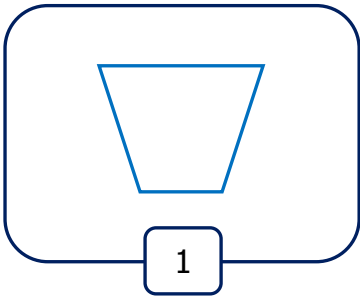
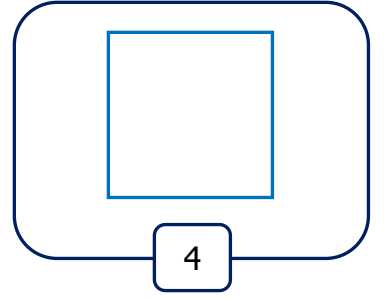
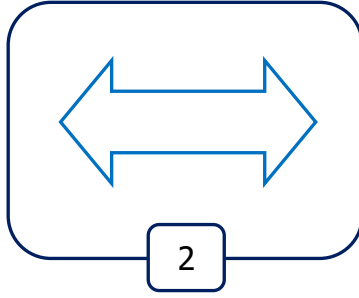
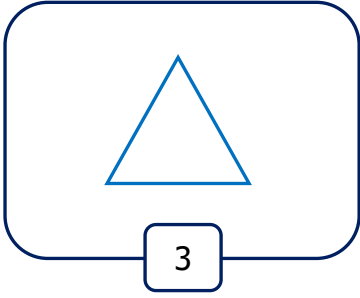
Aşağıdaki varlıkları iki eş parçaya ayıralım.



Yarısı verilmiş şekillerin eş parçalarını çizip boyayınız.



Aşağıdaki şekilleri altlarında belirtilen sayı kadar farklı yerlerden iki eş parçalara ayıralım.








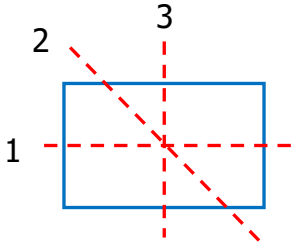
1) Yukarıdaki şekillerden hangileri iki eş parçaya ayrılabilir?

- A)   B)   C)  

2) Aşağıdakilerden hangisi iki eş parçaya ayrılabilir?

- A)  B)  C) 

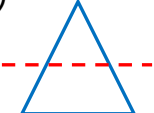


3)




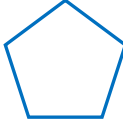

Yukarıdaki dikdörtgeni hangi çizgiler iki eş parçaya ayırmıştır?

- A) 2 ve 3 B) 1 ve 2 C) 1 ve 3




4) İki eş parçaya ayrılmış üçgen hangisidir?

- B)  B)  C) 




5) Aşağıdakilerden hangisi simetrik bir şekil değildir?

- A)  B)  C) 

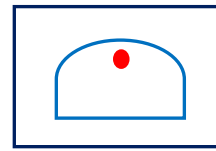
6) Aşağıdaki şekillerden hangisine en az simetri çizgisi çizilir?

- A)  B)  C) 


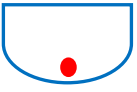
7) Aşağıdaki varlıklardan hangisini iki eş parçaya ayıramayız?

- B)  B)  C) 

8)



Yukarıdaki şeklin diğer yarısı aşağıdakilerden hangisidir?

- A)  B)  C) 