




$$\frac{1}{2}$$




$$\frac{2}{4}$$




$$\frac{3}{5}$$




$$\frac{1}{6}$$




$$\frac{4}{5}$$




$$\frac{2}{3}$$




$$\frac{2}{6}$$




$$\frac{3}{4}$$



$$\frac{3}{6}$$



$$\frac{1}{3}$$



⚡ Şekilleri verilen kesirlere göre parçalara ayırın ve kesrin parça sayısına göre boyayın.