




$$\frac{1}{4}$$




$$\frac{2}{7}$$




$$\frac{3}{6}$$




$$\frac{4}{7}$$




$$\frac{1}{5}$$




$$\frac{2}{5}$$




$$\frac{4}{6}$$




$$\frac{3}{7}$$



$$\frac{1}{7}$$



$$\frac{5}{6}$$



⚡ Şekilleri verilen kesirlere göre parçalara ayırın ve kesrin parça sayısına göre boyayın.