

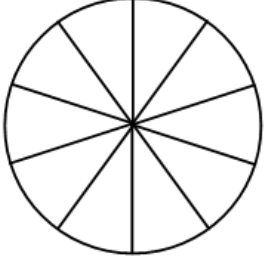


Adı Soyadı :

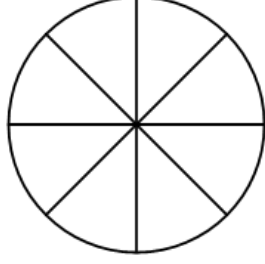
Numarası :

Konu: Kesirler (Payı Paydasından Küçük Kesirler Elde Edelim) Etkinliği

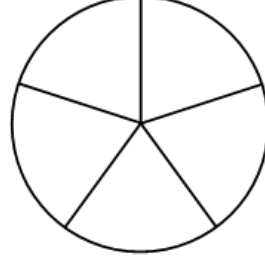
Aşağıdaki şekillerin belirtilen kesir kadarını boyyalım.



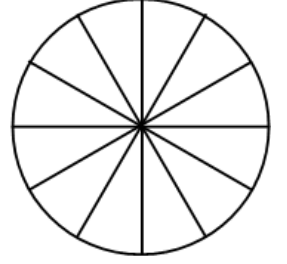
$$\frac{3}{10}$$



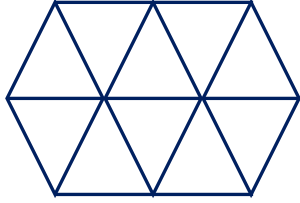
$$\frac{4}{8}$$



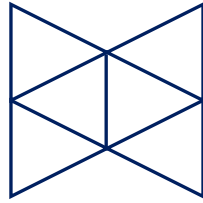
$$\frac{1}{5}$$



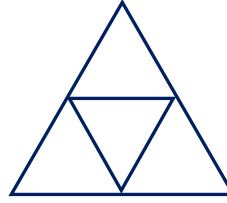
$$\frac{6}{12}$$



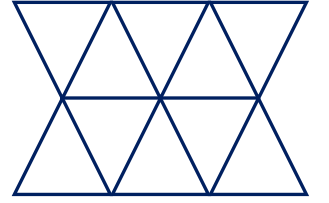
$$\frac{1}{10}$$



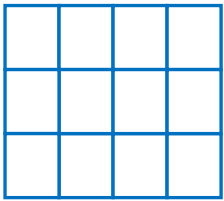
$$\frac{3}{6}$$




$$\frac{1}{4}$$




$$\frac{5}{10}$$




$$\frac{2}{12}$$



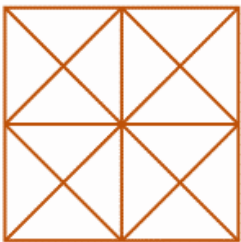
$$\frac{10}{18}$$



$$\frac{1}{9}$$




$$\frac{4}{15}$$



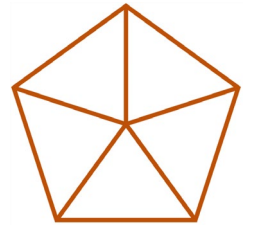
$$\frac{8}{16}$$



$$\frac{1}{6}$$



$$\frac{10}{12}$$



$$\frac{4}{5}$$

Aşağıdaki şekilleri, verilen kesirlere göre eşit parçalara ayırılım, belirtilen kesir kadarını boyyalım.



$$\frac{1}{4}$$




$$\frac{2}{8}$$




$$\frac{4}{8}$$




$$\frac{3}{4}$$




$$\frac{1}{3}$$



$$\frac{1}{4}$$



$$\frac{2}{8}$$



$$\frac{5}{8}$$




$$\frac{3}{6}$$



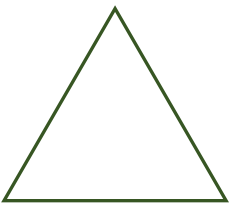
$$\frac{1}{8}$$



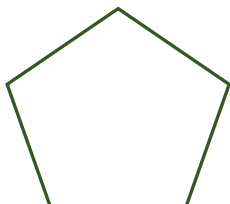
$$\frac{2}{4}$$



$$\frac{4}{14}$$




$$\frac{1}{2}$$



$$\frac{2}{5}$$



$$\frac{5}{7}$$



$$\frac{1}{4}$$