

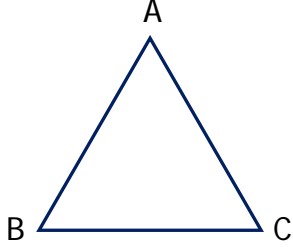


Adı Soyadı :

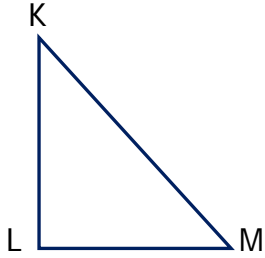
Numarası :

Konu: Üçgen, Kare ve Dikdörtgenin Kenarlarını ve Köşelerini İsimlendirme Etkinliği

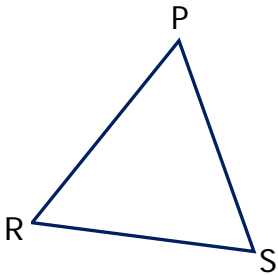
Aşağıda verilen üçgenleri isimlendirerek köşelerini örnekteki gibi isimlendirelim.



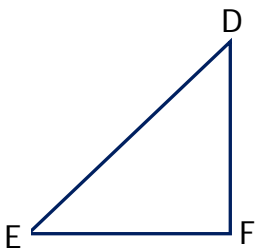
İsimlendirme Köşeleri
 ABC üçgeni A köşesi
 BCA üçgeni B köşesi
 CAB üçgeni C köşesi



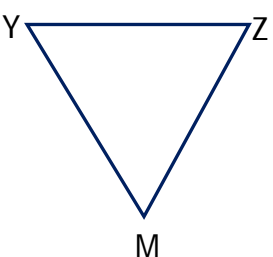
İsimlendirme Köşeleri



İsimlendirme Köşeleri

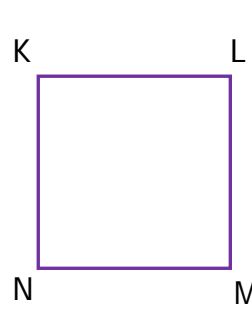


İsimlendirme Köşeleri

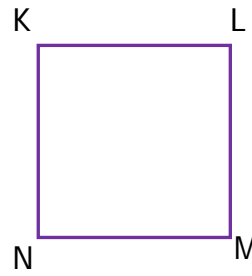


İsimlendirme Köşeleri

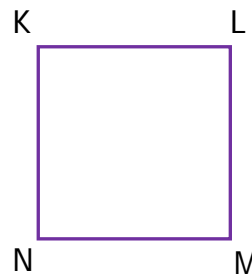
Aşağıda verilen kareleri isimlendirerek köşelerini örnekteki gibi isimlendirelim.



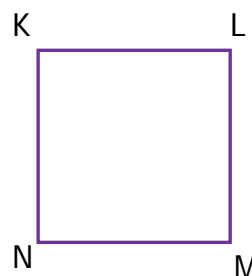
İsimlendirme Köşeleri
 KLMN karesi K köşesi
 LMNK karesi L köşesi
 NKLM karesi M köşesi
 KNML karesi N köşesi



İsimlendirme Köşeleri



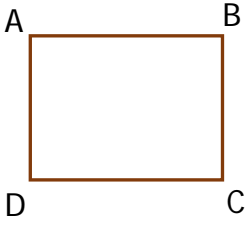
İsimlendirme Köşeleri



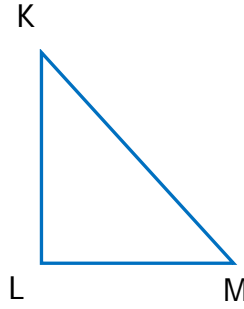
İsimlendirme Köşeleri

Aşağıda verilen dikdörtgenleri isimlendirerek köşelerini örnekteki gibi isimlendirelim.

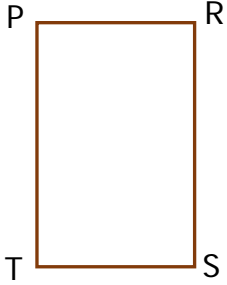
Aşağıda verilen üçgen, kare ve dikdörtgenleri kenarlarını ve köşelerini isimlendirelim.




| <u>İsimlendirme</u> | <u>Köşeleri</u> |
|---------------------|-----------------|
| ABCD dikdörtgeni | A köşesi |
| BCDA dikdörtgeni | B köşesi |
| CDAB dikdörtgeni | C köşesi |
| ADCB dikdörtgeni | D köşesi |



| <u>Kenarları</u> | <u>Köşeleri</u> |
|------------------|-----------------|
| KL kenarı | K köşesi |
| LM kenarı | L köşesi |
| MK kenarı | M köşesi |



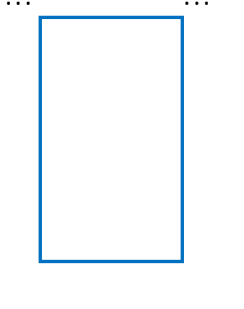
| <u>İsimlendirme</u> | <u>Köşeleri</u> |
|---------------------|-----------------|
| | |
| | |
| | |
| | |




| <u>Kenarları</u> | <u>Köşeleri</u> |
|------------------|-----------------|
| | |
| | |
| | |
| | |



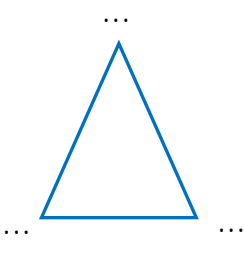
| <u>İsimlendirme</u> | <u>Köşeleri</u> |
|---------------------|-----------------|
| | |
| | |
| | |
| | |



| <u>Kenarları</u> | <u>Köşeleri</u> |
|------------------|-----------------|
| | |
| | |
| | |
| | |

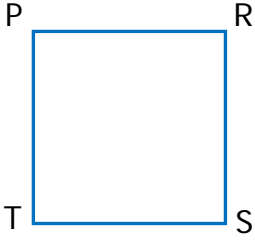


| <u>İsimlendirme</u> | <u>Köşeleri</u> |
|---------------------|-----------------|
| | |
| | |
| | |
| | |



| <u>Kenarları</u> | <u>Köşeleri</u> |
|------------------|-----------------|
| | |
| | |
| | |
| | |

1)



Yukarıdaki karenin isimlendirmesi aşağıdakilerden hangisi olamaz?

- A) PRST karesi B) RSTP karesi
C) TPRS karesi D) TRSP karesi

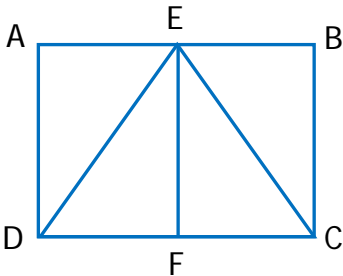
2)



Yandaki dikdörtgenin kenarlarından biri hangisinde doğru olarak adlandırılmıştır?

- A) [KM] B) [NL]
C) [LM] D) [MK]

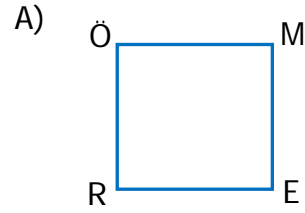
3)



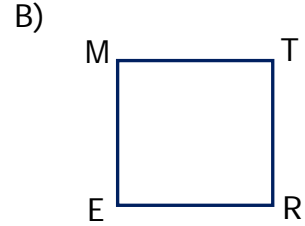
Yukarıdaki şekille ilgi aşağıdakilerden hangisi söylenemez?

- A) EDC bir üçgendir.
B) AEFD bir karedir.
C) ABCD bir dikdörtgendir.
D) EBC bir üçgendir.

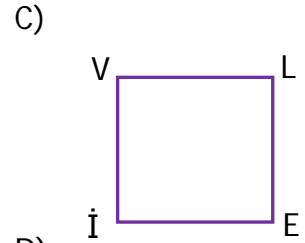
4) Aşağıdaki karelerden hangisinin adı yanlış söylenmiştir?



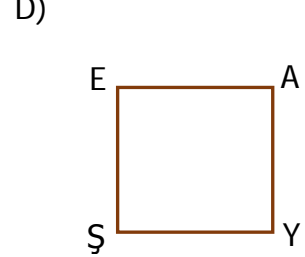
ÖMER karesi



MERT karesi

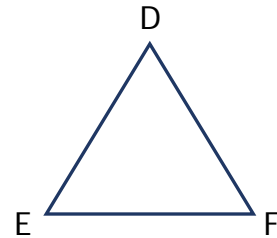


VELİ karesi



AYŞE karesi

5)



Yukarıdaki üçgenin kenarları hangi seçenekte yanlış verilmiştir?

- A) [DE], [EF], [FD]
B) [FD], [DE], [EF]
C) [EF], [FD], [DE]
D) [DE], [EF], [FG]