



Adı Soyadı : .....

Numarası : .....

Konu: Bölme İşlemini Öğrenelim Etkinliği 5

Aşağıdaki findıkları gruplara ayırarak, çıkarma ve bölme işlemi olarak tamamlayınız.

12 tane cevizi 3 sincaba eşit olarak paylaşalım.





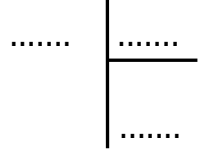

..... - ..... = .....

..... - ..... = .....

..... - ..... = .....

..... - ..... = .....

..... fındık düşer.



20 tane cevizi 4 sincaba eşit olarak paylaşalım.







..... - ..... = .....

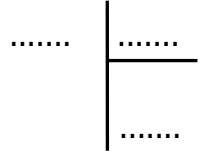
..... - ..... = .....

..... - ..... = .....

..... - ..... = .....

..... - ..... = .....

..... fındık düşer.



15 tane cevizi 5 sincaba eşit olarak paylaşalım.





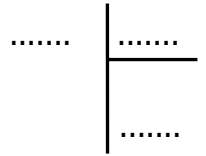



..... - ..... = .....

..... - ..... = .....

..... - ..... = .....

..... fındık düşer.



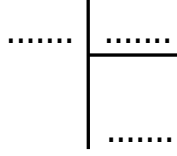
Aşağıdaki verilen çıkarma işlemlerini bölme işlemi olarak tamamlayınız.

$16 - 4 = 12$

$12 - 4 = 8$

$8 - 4 = 4$

$4 - 4 = 0$



$18 - 3 = 15$

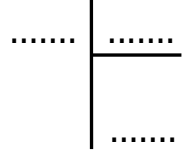
$15 - 3 = 12$

$12 - 3 = 9$

$9 - 3 = 6$

$6 - 3 = 3$

$3 - 3 = 0$



$14 - 2 = 12$

$12 - 2 = 10$

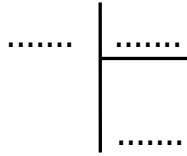
$10 - 2 = 8$

$8 - 2 = 6$

$6 - 2 = 4$

$4 - 2 = 2$

$2 - 2 = 0$



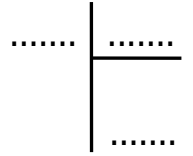
$10 - 2 = 8$

$8 - 2 = 6$

$6 - 2 = 4$

$2 - 2 = 2$

$2 - 2 = 0$



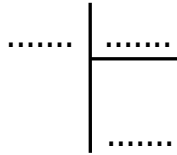
$15 - 3 = 12$

$12 - 3 = 9$

$9 - 3 = 6$

$6 - 3 = 3$

$3 - 3 = 0$

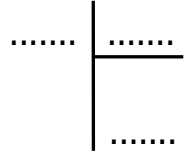


$20 - 5 = 15$

$15 - 5 = 10$

$10 - 5 = 5$

$5 - 5 = 0$



$30 - 5 = 25$

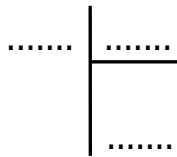
$25 - 5 = 20$

$20 - 5 = 15$

$15 - 5 = 10$

$10 - 5 = 5$

$5 - 5 = 0$



$20 - 4 = 16$

$16 - 4 = 12$

$12 - 4 = 8$

$8 - 4 = 4$

$4 - 4 = 0$

