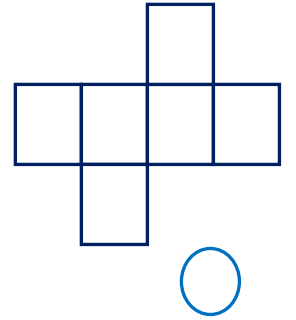
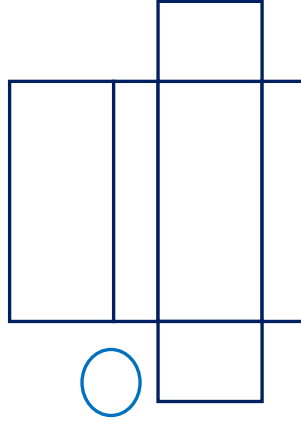
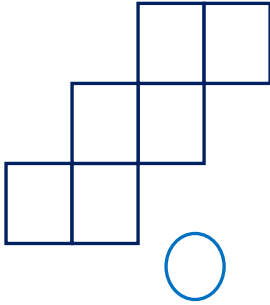
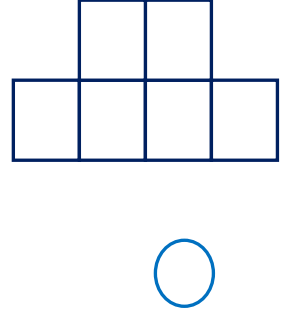
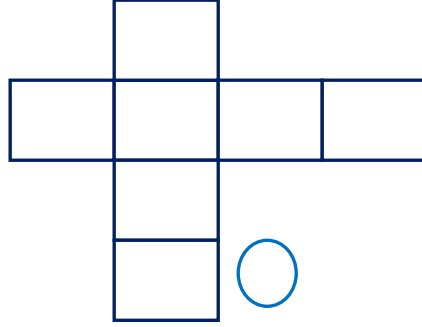
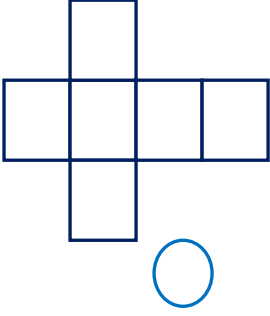


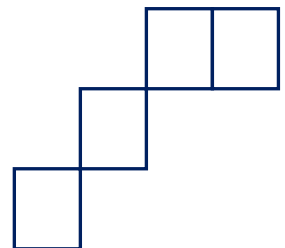
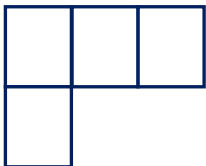
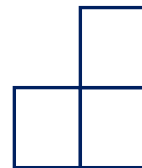
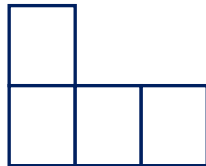
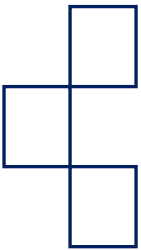
Adı Soyadı : .....

Numarası : .....

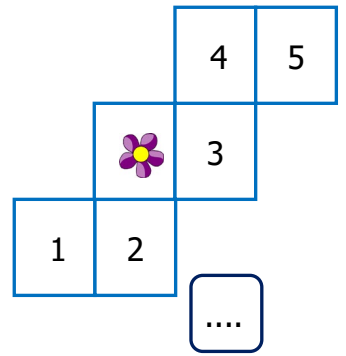
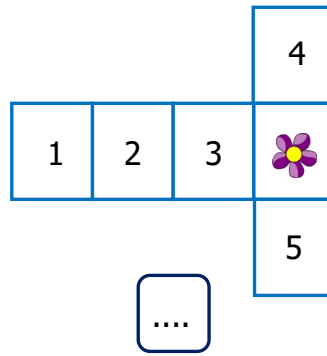
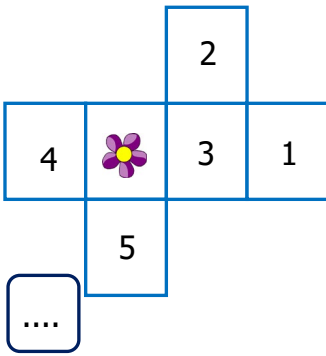
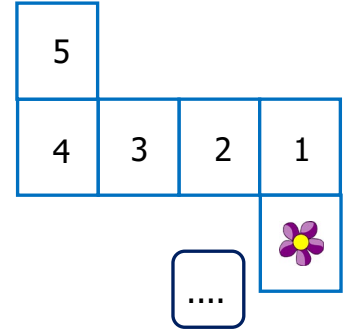
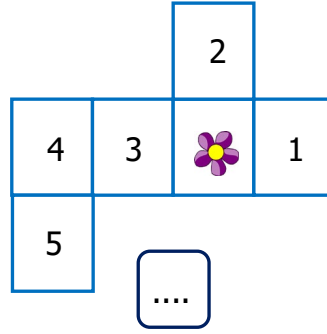
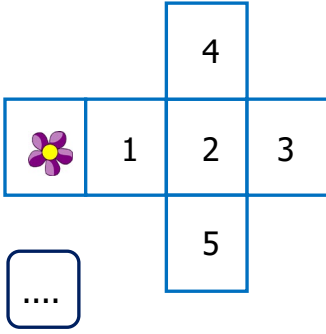
Konu: Açınımı Verilen Küpü Oluşturma Etkinliği

Aşağıdaki açınımlardan küpe ait olanları işaretleyiniz.

Aşağıdaki açınımları küp olacak şekilde tamamlayınız.



Aşağıda açınımları verilen küpleri oluşturduğumuzda çiçeğin karşısına hangi rakamın geleceğini altlarındaki kutulara yazalım.







1) Küpün, kare şeklinde .... eş yüzü vardır.

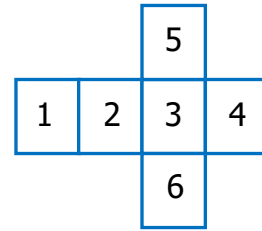
Yukarıdaki ifadede noktalı yere aşağıdakilerden hangisi yazılmalıdır?

- A) 2                      B) 4  
C) 6                      D) 8

2) Aşağıda verilen kartların hangisiyle küp yapılabilir?

- A)   
B)   
C)   
D) 

3)



Yukarıdaki açınımlı verilen küpün karşılıklı yüzlerinde yer almayan rakamlar hangileridir?

- A) 2, 3                      B) 6, 5  
C) 2, 4                      D) 1, 3

4) Aşağıda küp ile ilgili verilen ifadelerden hangisi yanlıştır?

- A) 8 köşesi vardır.  
B) 12 tane ayrıtı vardır.  
C) 6 yüzü vardır.  
D) Bütün yüzeyleri dikdörtgendir.