




Adı Soyadı :

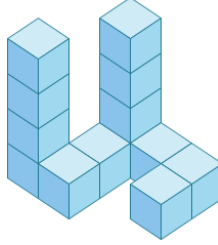
Numarası :

Konu: Çizimlere Uygun Yapılar (İzometrik Kağıtta Eş Küpler) Etkinliği 3


Aşağıda verilen yapılar kaç birim küpten oluşmuştur.




..... birim küp



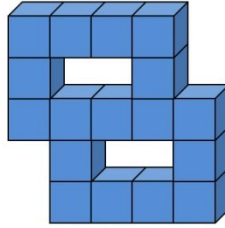
..... birim küp



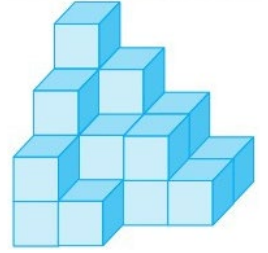
..... birim küp



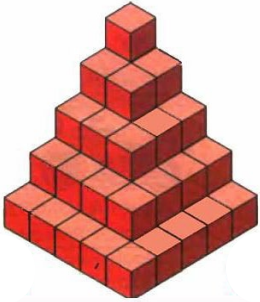
..... birim küp



..... birim küp




..... birim küp



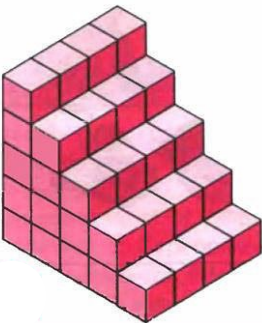
..... birim küp




..... birim küp



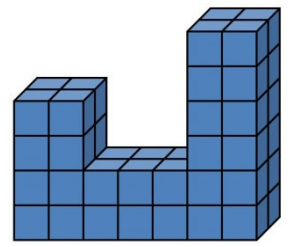
..... birim küp



..... birim küp

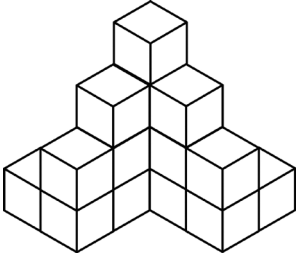


..... birim küp

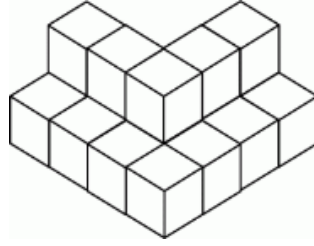


..... birim küp

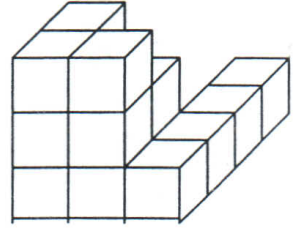
Aşağıda verilen yapılar kaç birim küpten oluştuğunu bularak boyayınız.



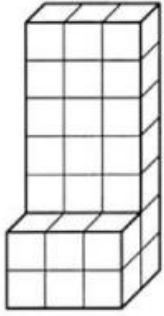
..... birim küp



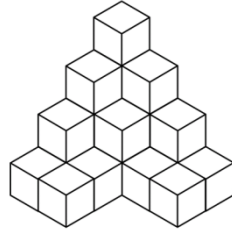
..... birim küp



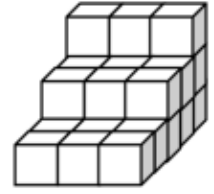
..... birim küp



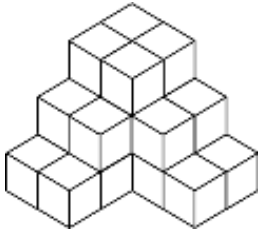
..... birim küp



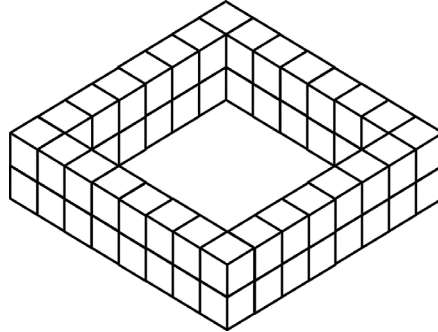
..... birim küp



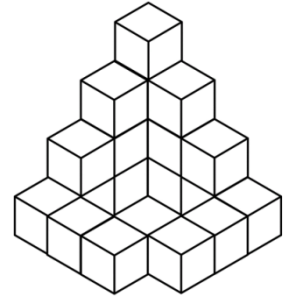
..... birim küp



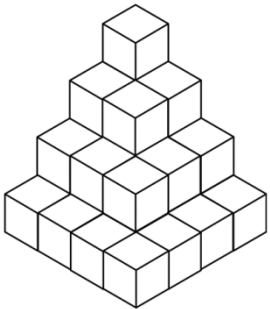
..... birim küp



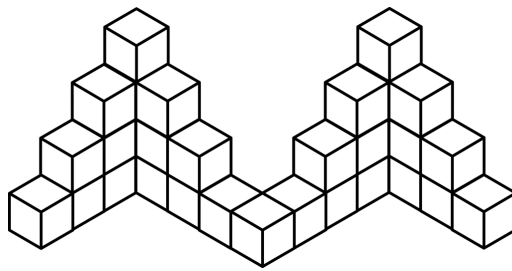
..... birim küp



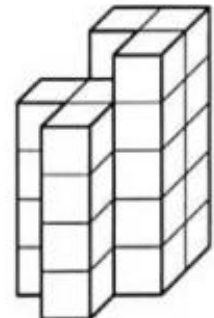
..... birim küp



..... birim küp



..... birim küp



..... birim küp