



Adı Soyadı :

Numarası :

Konu: Kesirler (Bütün, Yarım) Etkinliği 4

Aşağıdaki noktalı yerleri örnekteki gibi dolduralım.



Bütün elma



Yarım elma




Yarım elma

Bir bütün elma

İki yarım elma



..... karpuz



..... karpuz



..... karpuz

Bir karpuz

İki karpuz



..... portakal



..... portakal



..... portakal

Bir portakal

İki portakal



..... kivi



..... kivi


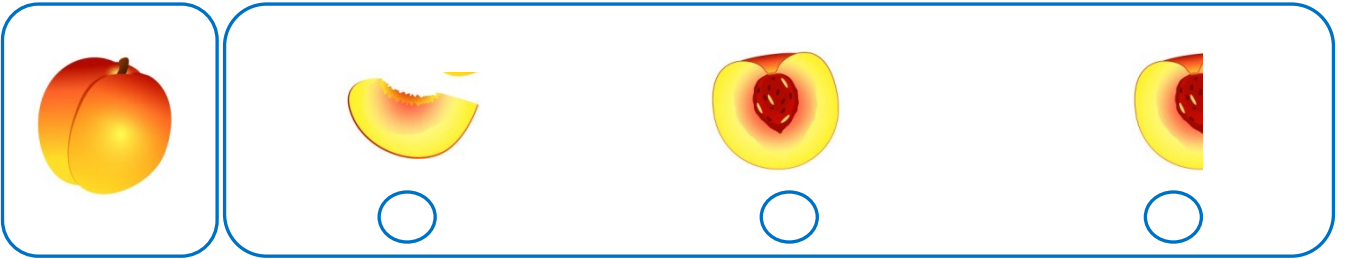





..... kivi

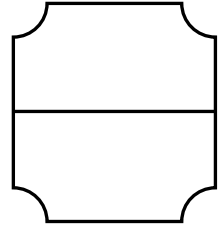
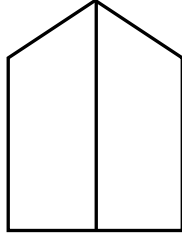

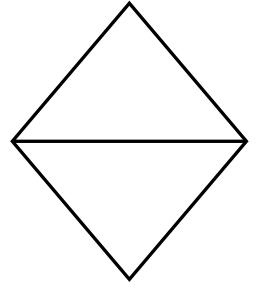
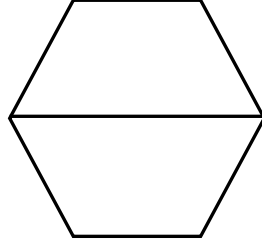

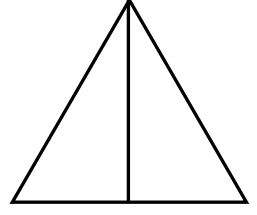


Bir kivi

İki kivi

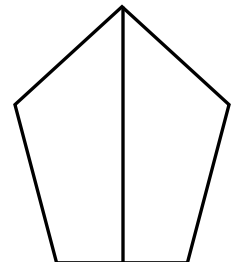
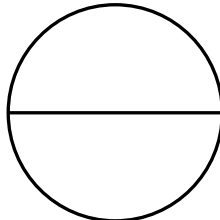

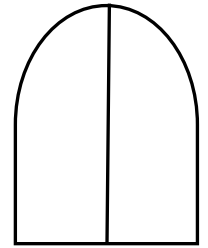

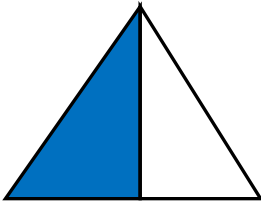
Aşağıda bütün olarak verilen yiyeceklerin yarım olan görsellerini işaretleyiniz.



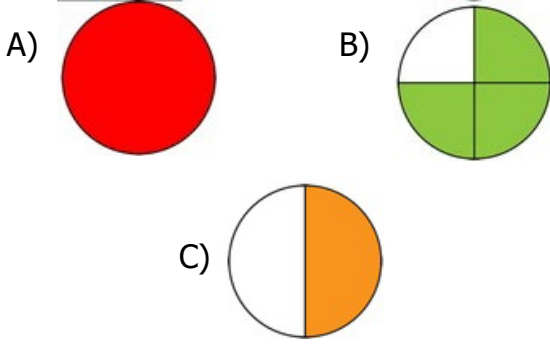
Aşağıdaki şekillerin bütününi örnekteki gibi boyayınız.



Aşağıdaki şekillerin yarisını örnekteki gibi boyayınız.



1) Aşağıdaki şekillerin hangisinin yarısı boyanmıştır?




2) İki yarım bütün eder.
Bir bütün eder.

Yukarıdaki noktalı yerlere hangisi yazılamaz?

A) bir B) iki C) üç



Yukarıdaki elmalardan kaç yarım elma oluşur?



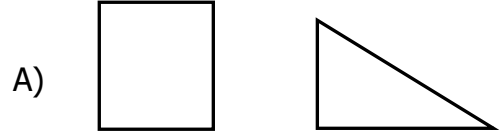


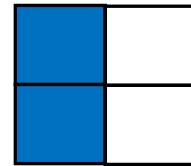
4) 8 yarım kaç bütün eder?

A) 4 B) 3 C) 2

5) 

Yukarıda verilen şekillerin bütünle hangisinde verilmiştir?



6) 

Yukarıdaki şeklin ne kadar boyanmıştır?

A) Yarısı
B) Bütünü
C) Çeyreği



Yukarıdaki portakallar kaç bütün portakal eder?

A) 1 B) 2 C) 3