

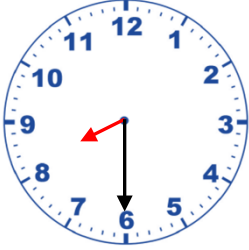


Adı Soyadı :

Numarası :

Konu: Zamanı Ölçme (Saatler) Etkinliği 4


Dijital saatlerin gösterdiği zamanı analog saatlerde örnekteki gibi gösteriniz.



08.30



16.00



06.15



13.45



23.00



03.15



17.45



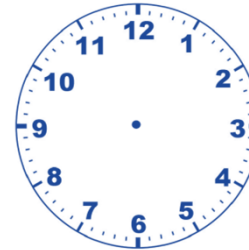
10.30



06.30



22.15



23.30



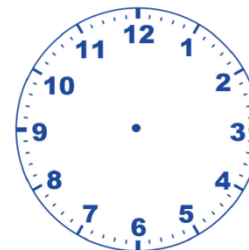
02.45



14.15



09.00

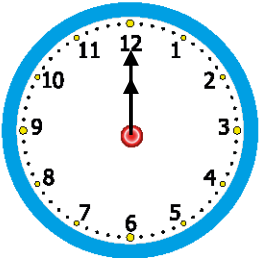
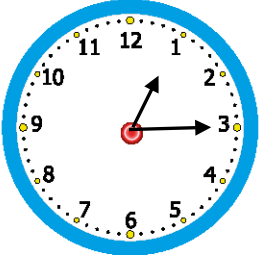
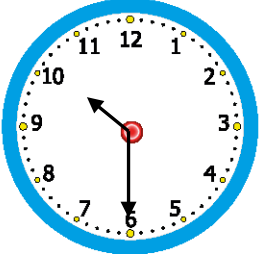
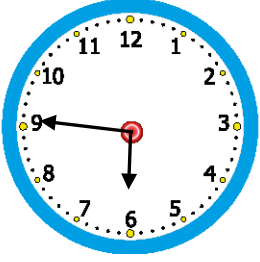
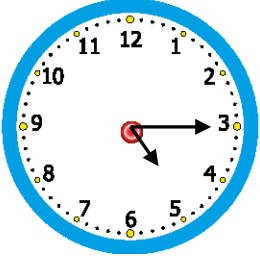
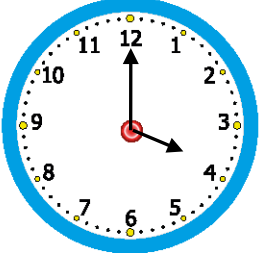


20.15

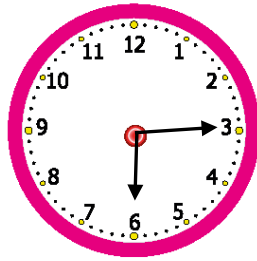

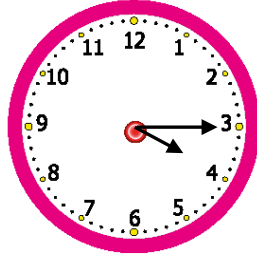
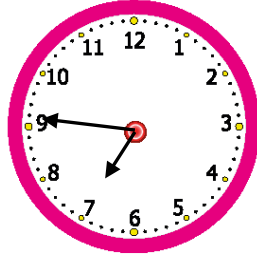
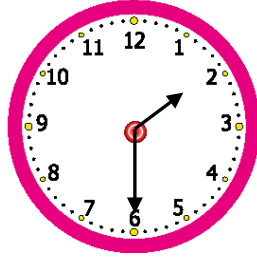



19.45

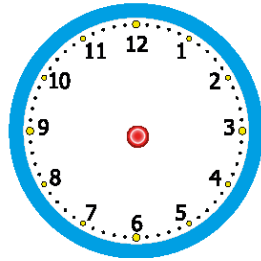
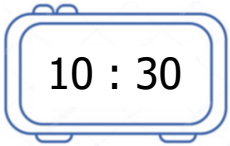
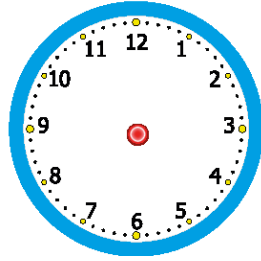
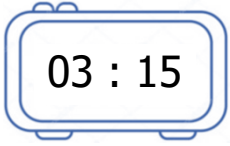
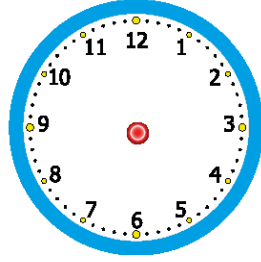
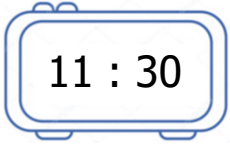
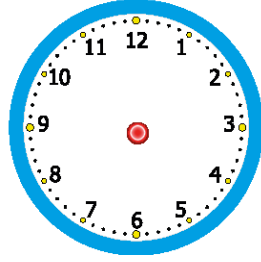
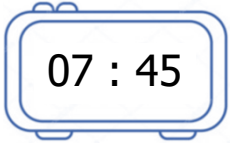
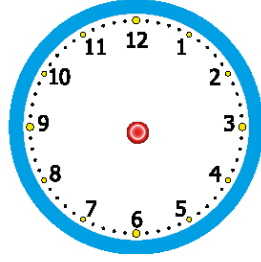
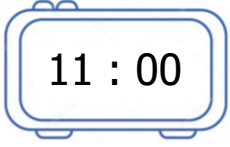
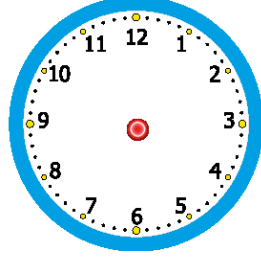

Aşağıda analog saatlerin öğleden önce kaç gösterdiğini dijital saat üzerine yazınız.



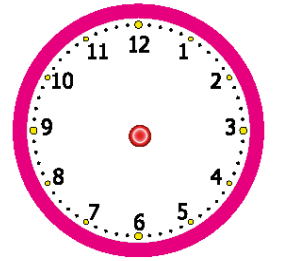
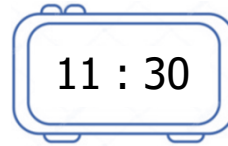
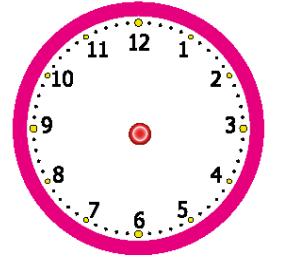
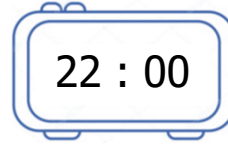
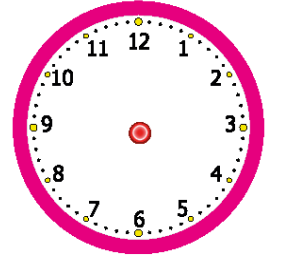
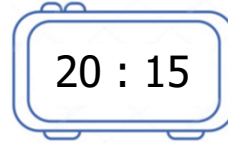
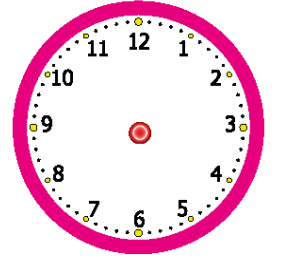
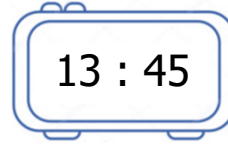
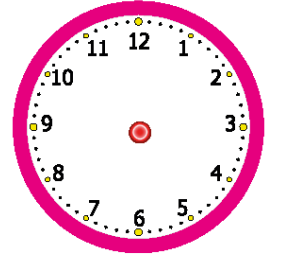
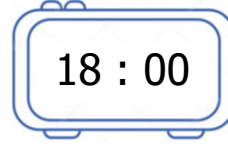
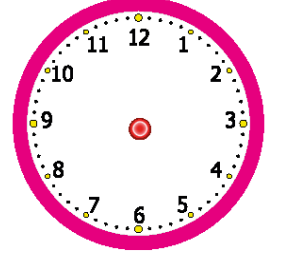
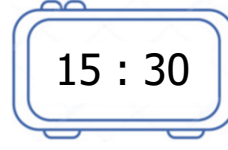
Aşağıda analog saatlerin öğleden sonra kaç gösterdiğini dijital saat üzerine yazınız.



Aşağıda dijital saatlerin öğleden önce kaç gösterdiğini analog saat üzerinde gösteriniz.




Aşağıda dijital saatlerin öğleden sonra kaç gösterdiğini analog saat üzerinde gösteriniz.

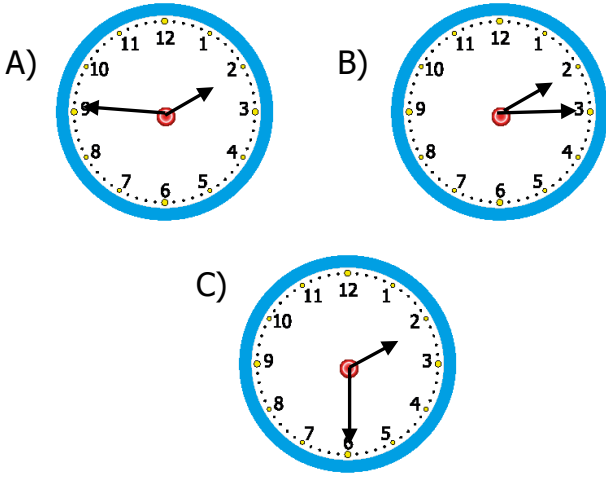


1) Yandaki saat yarım saat sonra saat kaç gösterir?

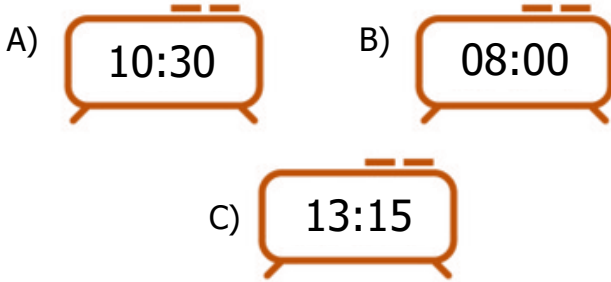
- A) 04.00
B) 05.00
C) 05.30



2) Aşağıdaki saatlerden hangisinin okunuşu "ikiye çeyrek var" şeklindedir?

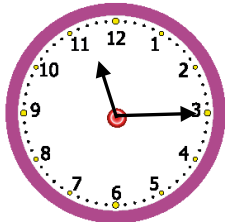


3) Aşağıdaki saatlerden hangisi öğleden sonraki bir zamanı gösterir?

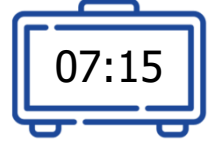


4) Yandaki analog saatin gösterdiği zaman aşağıdakilerden hangisinde doğru olarak verilmiştir?

- A) 11.15
B) 11.45
C) 11.05



5) Yandaki dijital saatin okunuşu aşağıdakilerden hangisidir?



- A) Yediye çeyrek var
B) Yediyi çeyrek geçiyor
C) Yedi buçuk

6)

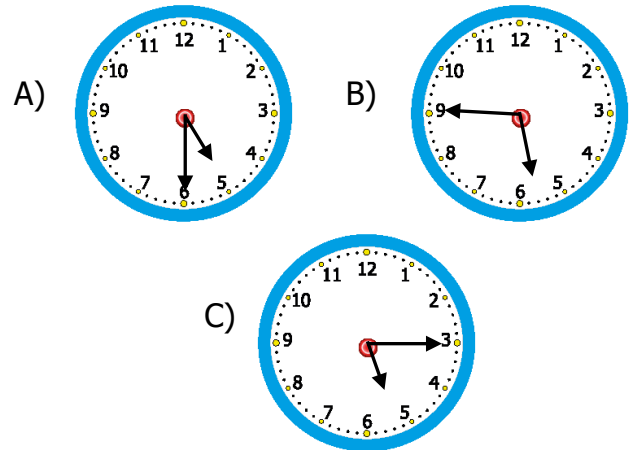


Her sabah 8'e çeyrek kala uyanırım.

Aşağıdaki saatlerden hangisi Ahmet'in sabahları uyandığı saati göstermektedir?

- A)
- B)
- C)

7) Yandaki dijital saatin analog saat olarak gösterilişi aşağıdakilerden hangisidir?



8) Yandaki saat, günün hangi bölümüne aittir?



- A) sabah
B) öğle
C) akşam