

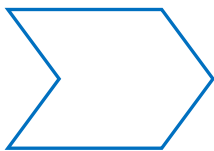

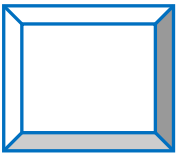
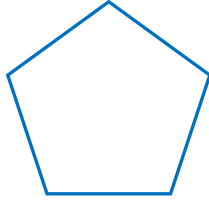
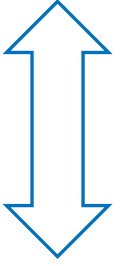



Adı Soyadı :

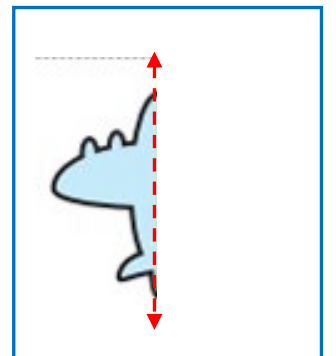
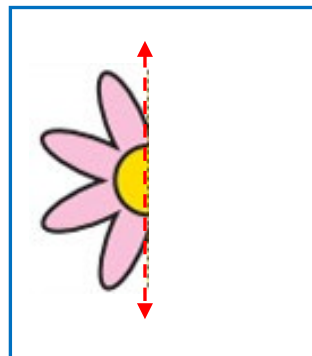
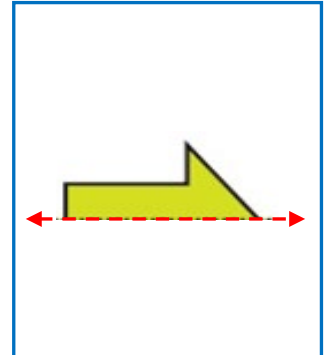
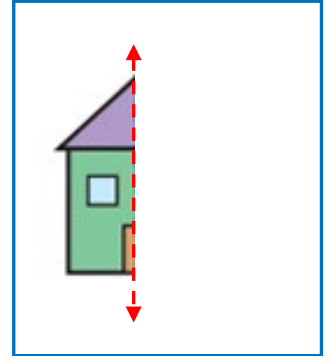
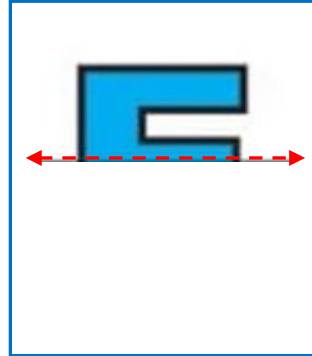
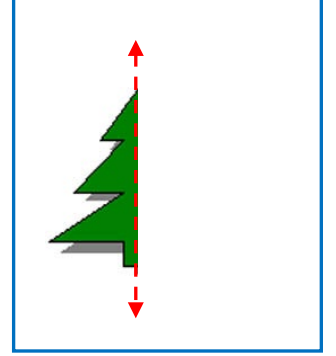
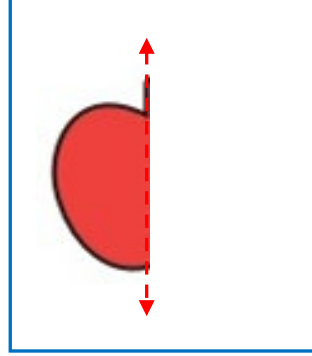
Numarası :

Konu: Uzamsal İlişkiler (Simetri Etkinliği) 2

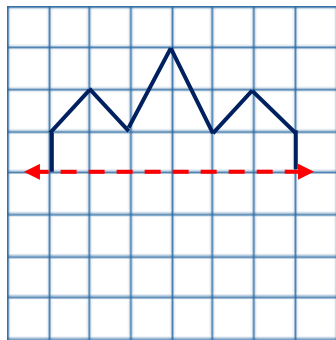
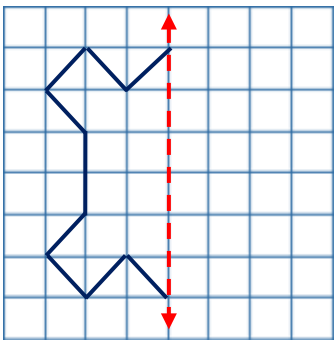
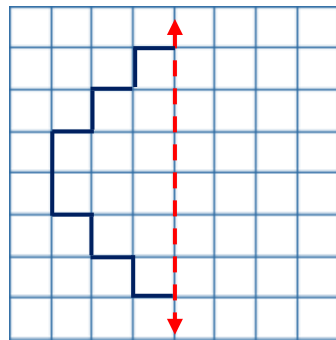
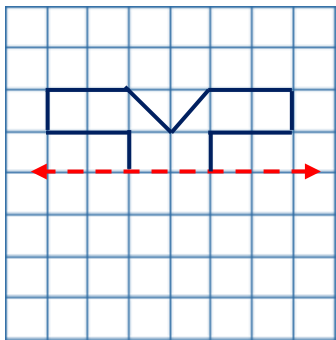
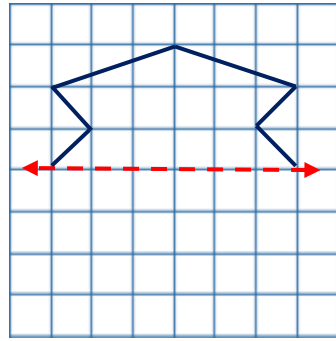
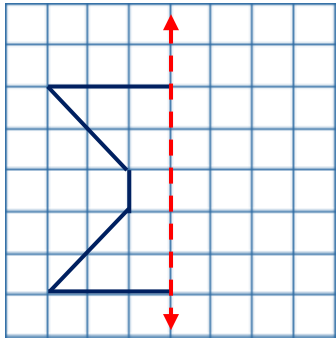
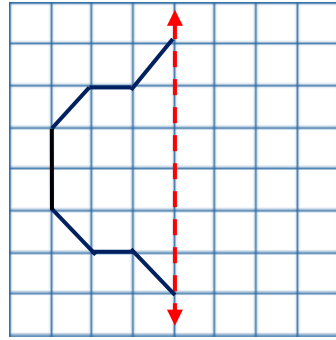
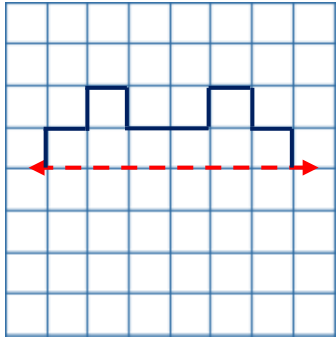
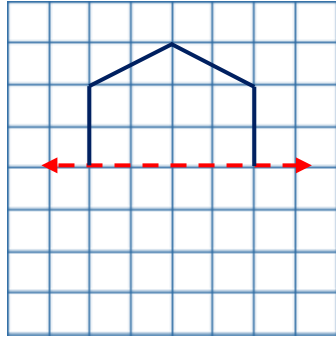
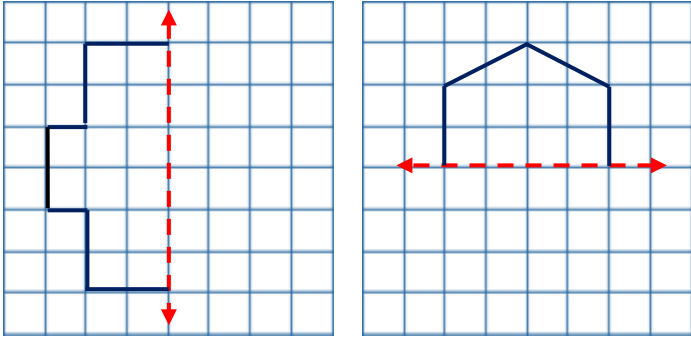
Aşağıdaki şekillerin simetri doğrularını çiziniz.



Aşağıda bir parçası verilen simetrik şekilleri doğrularına göre tamamlayınız.



Aşağıdaki şekillerin verilen simetri doğrusuna göre simetriklerini çizelim.



Aşağıdaki harflerden simetrik olanları işaretleyip simetri doğrularını çiziniz.

A

C

D

E

F

G

H

J

K

L

M

N

O

P

R

S

T

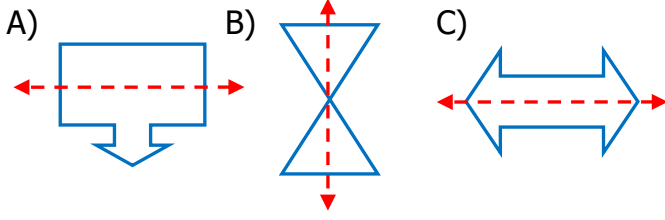
U

V

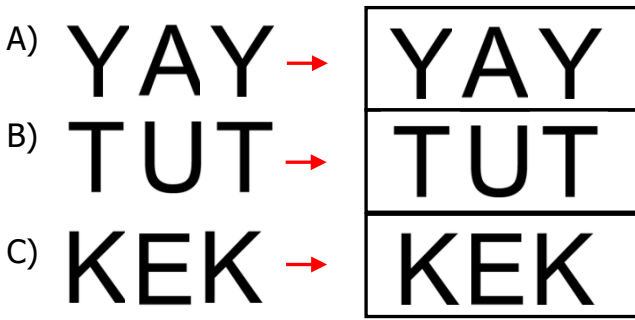
Y

Z

1) Aşağıdaki şekillerden hangisinin simetri doğrusu yanlış çizilmiştir?



2) Aşağıdaki harf gruplarından hangisinin aynadaki simetrisi yanlış verilmiştir?

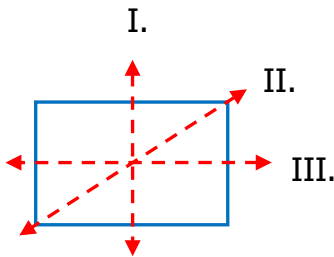


- 3) I. Her şeklin bir simetri doğrusu vardır.
II. Bir şeklin birden fazla simetrisi olabilir.
III. Simetri doğrusu bir şekli iki eş parçaya böler.

Yukarıda simetriyle ilgili verilen ifadelerden hangileri doğrudur?

- A) I. ve II. B) II. ve III C) I. ve III.


4)



Yukarıda numaralandırılmış doğru parçalarından hangisi dikdörtgenin simetrisi değildir?

- A) I. B) II. C) III.

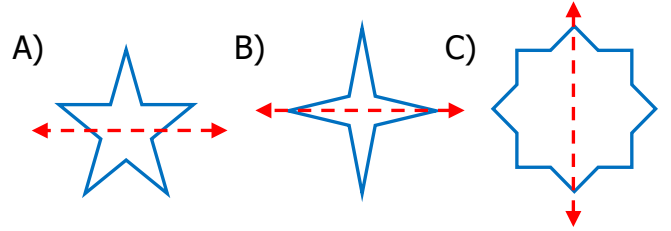
5)



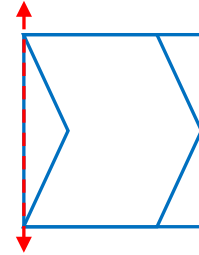
Yukarıdaki geometrik şekillerden hangisinin simetrisi daha çoktur?

- A) I. B) II. C) III.

6) Aşağıdaki şekillerden hangisinin simetri doğrusu yanlış çizilmiştir?



7)



Yukarıdaki şeklin simetri doğrusuna göre simetriği aşağıdakilerden hangisidir?

